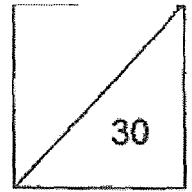




HENRY PARK PRIMARY SCHOOL  
2023 WEIGHTED ASSESSMENT 1  
MATHEMATICS  
PRIMARY 4



Name: \_\_\_\_\_ ( )

Class: P4 \_\_\_\_\_

Date: \_\_\_\_\_

Duration: 40 minutes

Parent's Signature: \_\_\_\_\_

**SECTION A: Open-Ended Questions (16 marks)**

Questions 1 to 8 carry 2 marks each. Show your working clearly and write your answers in the spaces provided. For questions which require units, give your answers in the units stated.

1 (a) What is the value of the digit 7 in 78 031?

Ans: (a) \_\_\_\_\_

(b) Round 39 492 to the nearest thousand.

Ans: (b) \_\_\_\_\_

2 (a) Which two numbers shown below are multiples of 3?

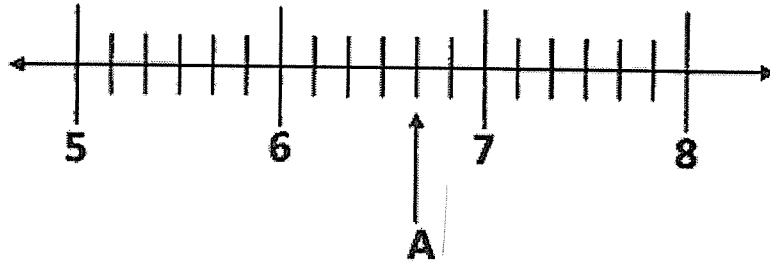
10 , 16 , 21 , 35 , 48 , 52

Ans: (a) \_\_\_\_\_ and \_\_\_\_\_

(b) Write 5 ten thousands, 91 tens and 7 ones in numerals.

Ans: (b) \_\_\_\_\_

- 3 (a) Find the value of A in the number line below. Express your answer as a mixed number in the simplest form.



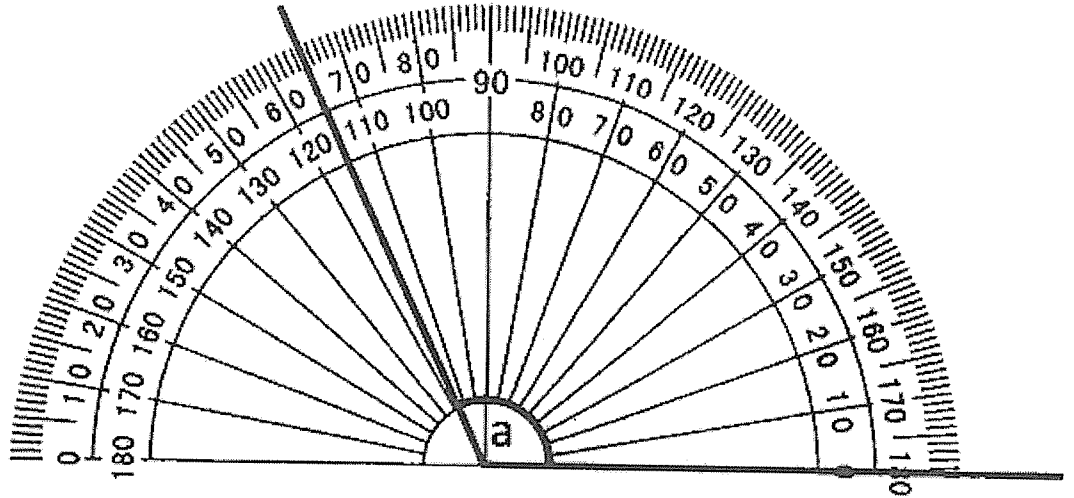
Ans: (a) \_\_\_\_\_

- (b) Arrange the following fractions in increasing order.

$$\frac{9}{4}, \frac{7}{12}, \frac{5}{3}$$

Ans: (b) \_\_\_\_\_

- 4 What is the value of  $\angle a$ ?



Ans: \_\_\_\_\_

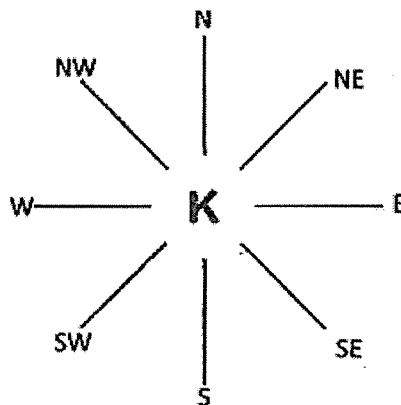
- 5 What is the quotient when 3950 is divided by 8?

Ans: \_\_\_\_\_

- 6 There are some marbles in a tin. The marbles can be put into either bags of 4 or bags of 7 with no remainder. What is the smallest possible number of marbles in the tin?

Ans: \_\_\_\_\_

- 7 (a) Ben was standing at Point K and facing West at first. He made a  $\frac{1}{4}$  - turn clockwise. Which direction will he be facing in the end?
- (b) Karen was standing at Point K. She made a  $\frac{3}{4}$  - turn anti-clockwise followed by a  $45^\circ$  turn clockwise. She was facing south-west in the end. Which direction was she facing at first?




Ans: (a) \_\_\_\_\_

(b) \_\_\_\_\_

8

In the figure below, how many more stars need to be shaded so that  $\frac{5}{8}$  of the stars are shaded?



Ans: \_\_\_\_\_

**SECTION B: Problem Sums (14 marks)**

For questions 9 to 12, show your working clearly and write your answers in the spaces provided. The number of marks available is shown in the brackets [ ] at the end of each question or part-question.

- 9 A shopkeeper had 60 boxes of masks. There were 100 masks in each box. He sold  $\frac{1}{3}$  of the masks. How many masks were left?

Ans : \_\_\_\_\_ [3]

10  $\frac{3}{7}$  of the pupils in a school are boys. There are 130 more girls than boys.

$\frac{1}{5}$  of the girls has short hair.

a) How many girls are there in the school?

b) How many girls have long hair?

Ans: (a) \_\_\_\_\_ [2]

(b) \_\_\_\_\_ [2]

**11** Alice and Betty had 3216 stickers altogether. After Alice gave Betty 180 stickers, she had 3 times as many stickers as Betty.

a). How many stickers did Betty have at last?

b) How many stickers did Alice have at first?

Ans : (a) \_\_\_\_\_ [2]

(b) \_\_\_\_\_ [2]



- 12 A fruit seller had 580 green apples and 235 red apples at first. After selling the same number of each type of apples, there were 4 times as many green apples as red apples left. How many of each type of apple was sold?

Ans: \_\_\_\_\_ [3]

- End of Paper -

Setter: Mrs Julia Wan



SCHOOL : HENRY PARK SCHOOL  
LEVEL : PRIMARY 4  
SUBJECT : MATH  
TERM : WA1 2023

---

Q1)	a)70000 b)39000
Q2)	a)21 and 48 b)50917
Q3)	a) $6\frac{2}{3}$ b) $\frac{7}{12}, \frac{5}{3}, \frac{9}{4}$
Q4)	115
Q5)	493
Q6)	28
Q7)	a) North b) South c)
Q8)	6
Q9)	$100 \times 60 = 6000$ $6000 \div 3 = 2000$ $2000 \times 2 = 4000$
Q10)	$130 \times 4 = 520$ $520 \div 5 = 104$ $104 \times 4 = 416$  a)520 b)416
Q11)	a) $3216 \div 4 = 804$ b) $804 \times 3 = 2412$ $2412 + 180 = 2592$
Q12)	$580 - 235 = 345$ $345 \div 3 = 115$ $235 - 115 = 120$

