

**Nanyang Primary School
Primary 3
Mathematics
Term 1 Weighted Assessment**

Name: _____ ()

Marks:

/20

Class: Primary 3 ()

Date: _____

Parent's Signature: _____

Duration: 45 minutes

Please sign and return the examination paper the next day. Any queries should be raised at the same time when returning paper.

Questions 1 to 3 carry 2 marks each. For each question, four options are given. One of them is the correct answer. Make your choice (1, 2, 3 or 4) and write your answer (1, 2, 3 or 4) in the bracket () provided.

(6 marks)

1. In 5690, which digit is in the hundreds place?

(1) 0

(2) 5

(3) 6

(4) 9

()

2. What is the missing number?

is 100 more than 8930.

(1) 8830

(2) 8940

(3) 9030

(4) 9930

()

3. The sum of two 2-digit numbers is 88.
The difference between the two numbers is more than 20 but less than 40.
The digits used to form the greater number and the smaller number are the same.
What is the smaller number?

- (1) 17
(2) 26
(3) 35
(4) 44


()

Questions 4 to 8 carry 2 marks each. Show your working clearly and write your answers in the spaces provided. For questions which require units, give your answers in the units stated. (10 marks)

4. Write the numbers in numerals in the boxes given.

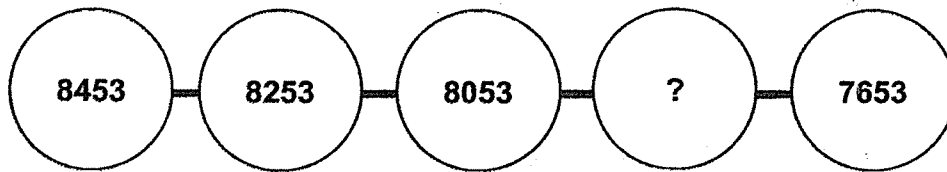
a) Five thousand, nine hundred and eighty-one	
b) Six thousand and seventy-three	

5. Form the smallest 4-digit even number with the following digits.
Each digit can only be used once.



Ans: _____

6. Look at the number pattern.



What is the missing number?

Ans: _____

7. Mrs Lim baked 239 more pies than cookies.
She then gave away 2541 cookies and had 1981 cookies left.
How many pies did she bake?

Ans: _____

8. Paul had 3 shirts and 3 pairs of shorts.
He had a red shirt, a purple shirt and a green shirt.
He had a pair of white shorts, a pair of black shorts and a pair of yellow shorts.
In how many different ways could Paul match a shirt and a pair of shorts?

Ans: _____

For question 9, show your working clearly and write your answers in the spaces provided. The number of marks available is shown in brackets [] at the end of each question or part-question. (4 marks)

9. Jane has 4153 marbles.
Siva has 1122 marbles fewer than Jane.
Jane has 1739 marbles fewer than Liz.
- (a) How many marbles does Siva have?
- (b) How many marbles does Liz have?

Ans: (a) _____ [2]
(b) _____ [2]

End of Paper

Nanyang Primary School
Primary 3
Mathematics 2022
Term 2 Weighted Assessment

Name: _____ ()

Class: Primary 3 ()

Date: _____

Parent's Signature: _____

Marks:

/20

Duration: 45 minutes

Please sign and return the examination paper the next day. Any queries should be raised at the same time when returning paper.

Questions 1 to 3 carry 2 marks each. For each question, four options are given. One of them is the correct answer. Make your choice (1, 2, 3 or 4) and write your answer (1, 2, 3 or 4) in the bracket () provided.

(6 marks)

1. Multiply 456 by 8.

(1) 3208

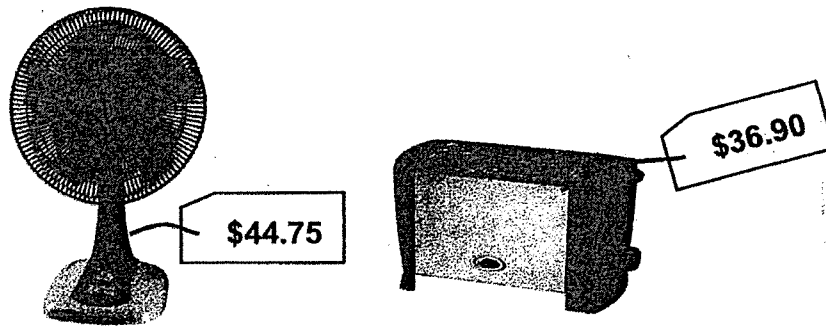
(2) 3248

(3) 3608

(4) 3648

()

2. Daniel bought a fan for \$44.75 and a bread toaster for \$36.90.



How much did he pay altogether?

- (1) \$81.65
- (2) \$80.65
- (3) \$71.65
- (4) \$70.65

()

3. Yong Fei paid a total of \$100 to buy 3 different items as shown below.

Item	Price
Telephone	\$45.50
Teapot	\$34.20
Basket	\$14.00

Item	Price
Clock	\$20.30
Kettle	\$40.05
Lamp	\$41.50

He bought the telephone.
Which other two items did he buy?

- (1) Basket and Clock
- (2) Basket and Kettle
- (3) Clock and Teapot
- (4) Lamp and Teapot

()

Questions 4 to 8 carry 2 marks each. Show your working clearly and write your answers in the spaces provided. For questions which require units, give your answers in the units stated. (10 marks)

4. $136 \div 8 = \boxed{?}$

What is the missing number in the box?

Ans: _____

5. Susan has \$258.
She has thrice as much money as Kartijah.
How much money do Susan and Kartijah have altogether?

Ans: \$ _____

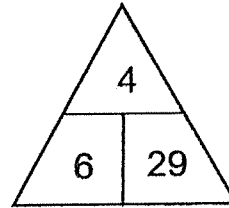
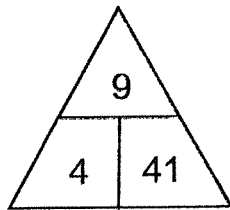

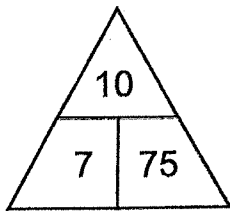
6. There are 361 Chinese books in a library.
The number of English books in the library is 6 times as many as the number of Chinese books.
How many more English books than Chinese books are there in the library?

Ans: _____

7. Kevin has 3 times as many toy cars as Peter.
After Kevin gives away 20 cars to his sister, he will have the same number of toy cars Peter has.
How many toy cars does Kevin have at first?

Ans: _____

8. Study the pattern below.



What is the missing number?

Ans: _____

For question 9, show your working clearly and write your answers in the spaces provided. The number of marks available is shown in brackets [] at the end of each question or part-question. (4 marks)

9. Halim had some money.
He spent \$40 and saved the remaining \$30.80.
(a) How much money did Halim have at first?

Halim saved \$10.60 more than Mei Ling.
(b) How much money did Mei Ling save?

Ans: (a) _____ [2]
(b) _____ [2]

End of Paper

YEAR : 2022
LEVEL : PRIMARY 3
SCHOOL : NANYANG PRIMARY SCHOOL
SUBJECT : MATHEMATICS
TERM : TERM 1 WEIGHTED ASSESSMENT

Q1	3	Q2	3	Q3	2
----	---	----	---	----	---

Q4	a) 5981 b) 6073	Q5	2074
Q6	$8053 - 200 = 7853$	Q7	$2541 + 1981 = 4522$ $4522 + 239 = 4761$
Q8	$3 \times 3 = 9$	Q9	a) $4153 - 1122 = 3031$ b) $4153 + 1739 = 5892$

YEAR : 2022
SCHOOL : NANYANG PRIMARY SCHOOL
LEVEL : Primary 3
TERM : TERM 2 WEIGHTED ASSESSMENT
SUBJECT : Mathematics

Q1 4 Q2 1 Q3 3

Q4	$136 \div 8 = 17$	Q5	$\$258 \div 3 = \86 $\$258 + \$86 = \$344$
Q6	$361 \times 6 = 2166$ (English books) $2166 - 361 = 1805$	Q7	$20 \div 2 = 10$ $10 \times 3 = 30$
Q8	$50 - 5 = 45$ $45 \div 5 = 9$	Q9	a) $\$30.80 + \$40 = \$70.80$ b) $\$30.80 - \$10.60 = \$20.20$