

Rosyth School
WEIGHTED ASSESSMENT 1 2021
MATHEMATICS
Primary 3

Name : _____ ()

Total  40

Class : Pr 3 -

Duration: 50 min

Date : 10 May 2021

Parent's Signature: _____

Instructions to Pupils:

1. Do not turn over this page until you are told to do so.
2. Follow all instructions carefully.
3. Answer all questions.
4. This paper consists of 2 parts: Sections A and B.

	Maximum Marks	Marks Obtained
Section A	24	
Section B	16	
Total	40	

* This paper consists of 11 printed pages altogether (including the cover page).

This paper is not to be reproduced in part or whole without the permission of the Principal.

Section A (24 marks)

Questions 1 to 4 carry 1 mark each. Questions 5 to 14 carry 2 marks each. Write your answers in the spaces provided. Show your workings clearly. For questions which require units, give your answers in the units stated.

Do not write
in this space

1. In 8905, the digit 9 stands for _____.

Ans: _____

2. $6872 + 1208 =$ _____

Ans: _____

3. What is the product of 6 and 7?

Ans: _____

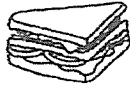
4. The following items were sold in the canteen.

Slice of Cake



\$1.40

Sandwich



\$1.60

Drink



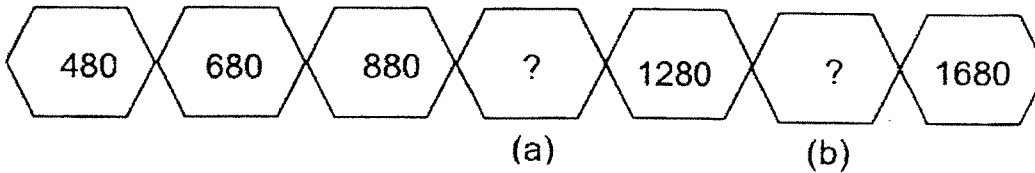
\$1.20

Aisha bought a slice of cake and a cup of drink.
How much did she spend altogether?

Ans: \$ _____

Do not write
in this space

5. Look at the diagram below. What are the missing numbers?



Ans: (a) _____

(b) _____

6. What is the smallest 4-digit odd number that can be formed using the digits below? Each digit can only be used once.

5	2	4	0
---	---	---	---

Ans: _____

Do not writ
in this spar

-
7. There were 1789 students in a school.
There were 985 boys.
How many girls were there in the school?

Ans: _____

-
8. Miss Lim packed 4 oranges in a bag each.
She gave away 8 such bags and had 1 bag left.
How many oranges does she have at first?

Ans: _____

9. Mr Tan had 768 pencils.
He packed 8 pencils into each box.
How many boxes did Mr Tan use to pack all the pencils?

Do not write
in this space

Ans: _____

10. Below are the prices of set lunch in a restaurant.

Set Lunch	Price
A	\$5.65
B	\$7.20

Kelly bought 1 Set Lunch A.
She gave the cashier a \$10 note.
How much change did she receive?

Ans: \$ _____

Do not write
in this space

11. A box contained red and blue beads.
There were 84 beads in the box.
There were twice as many red beads as blue beads.
How many blue beads were there?

Ans: _____

12. The following table shows the number of Primary 3 students in a school.

Class	Number of Primary 3 students
A	40
B	38
C	40

Every child was given 2 masks on Children's Day.
What was the total number of masks given to the students in Primary 3?

Ans: _____

13. Pete and 3 boys bought 204 game cards altogether.
They shared the game cards equally.
How many cards did each boy get?

Do not write
in this space

Ans: _____

-
14. Mr Lim paid \$1600 for a computer.
He paid \$960 less for a printer.
How much did he pay for both the computer and printer?

Ans: \$ _____

Section B (16 marks)

Questions 15 to 18 carry 4 marks each. Show your working clearly and write your answers in the spaces provided. The number of marks available is shown in brackets [] at the end of each question or part-question.

Do not write
in this space

15. A shop had 5600 bags.
The shopkeeper sold 1250 bags on Saturday.
He sold more bags on Sunday.
After that he had 440 bags left.
How many bags were sold on Sunday?

Ans: _____ [4]

16. Simon and Tim had the same number of books at first.
Tim bought 85 books and Simon gave 120 books away.
Simon had 60 books in the end.

- a) How many books did each boy have at first?
b) How many more books did Tim have than Simon in the end?


Do not write
in this space

Ans: a) _____ [2]

b) _____ [2]

17. The picture below shows the cost of ice-cream at Cool Shop.

Do not write
in this space



Ben bought 528 sticks of ice-cream for a carnival.
How much did he spend altogether?

Ans: _____ [4]

Do not write
in this space

18. There were 45 more girls than boys in the Art Club.

8 boys left the Art Club and 5 more girls join the Art Club.

a) How many more girls were there in the Art Club than boys in the end?

b) There were 640 students left in the Art Club.

How many boys were there in the Art Club in the end?

Ans: a) _____ [2]

b) _____ [2]



ANSWER KEY

YEAR : 2021
LEVEL : Primary 3
SCHOOL : Rosyth School
SUBJECT : MATHEMATICS
TERM : Weighted Assessment 1

Section A

Q1	900	Q2	$6872+1208=8080$
Q3	$6 \times 7 = 42$	Q4	$1.40+1.20=2.60$
Q5	(a) $880+200=1080$ (b) $1280+200=1480$	Q6	2045
Q7	$1789-985=804$	Q8	$9 \times 4 = 36$
Q9	$768 \div 8 = 96$	Q10	$10.00-5.65=4.35$
Q11	$84 \div 3 = 28$	Q12	$40+40+38=118$ $118 \times 2 = 236$
Q13	$204 \div 4 = 51$	Q14	$1600-960=640$ $1600+640=2240$

Section B

Q15	$1250+440=1690$ $5600-1690=3910$	Q16	(a) $60+120=180$ (b) $120+85=205$
Q17	$528 \div 4 = 132$ $132 \times 3 = \$396$	Q18	(a) $45+8+5=58$ (b) $640-58=582$ $582 \div 2 = 291$