

Pei Chun Public School
Weighted Assessment 2 - 2021
Mathematics
Primary 3

Name: _____ ()

Class : Primary 3/ _____

Date : 10 May 2021

Time : 35 min

Maths Teacher : _____

Parent's Signature: _____

Section A	14
Section B	6
TOTAL	20

Section A

Questions 1 to 6 carry 1 mark each. Write your answers in the spaces provided. For questions which require units, give your answers in the units stated.

(6 marks)

Do not
write in
this space

1. What is the product of 8 and 13?

Answer : _____

2. What is the quotient when 749 is divided by 7?

Answer : _____

SCORE



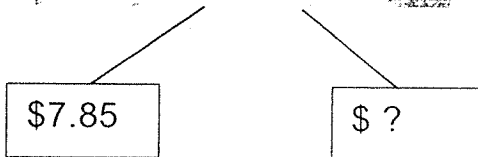
3. Count and write down the total amount shown in the picture.

Do not write
in this space



Answer : \$ _____

4. What is the amount needed to make \$10?



Answer : \$ _____

5. Write 615¢ in dollars.

Do not write
in this space

Answer : \$ _____

6. $\$2.45 + 160¢ = \$$

What is the missing amount?

Answer : \$ _____

SCORE

Questions 7 to 10 carry 2 marks each. Show your working clearly in the space below each question and write your answers in the spaces provided. For questions which require units, give your answers in the units stated. (8 marks)

Do not write
in this space

7. Alice bought 34 trays of eggs. There were 5 eggs in each tray. How many eggs did she buy?

Answer : _____

8. Michael had 348 stickers. Sarah had 3 times as many stickers as Michael. How many stickers did they have altogether?

Answer : _____

9. Ali had 74 apples. He packed them into as many bags of 6 as possible. How many apples were left unpacked?

Answer : _____

10. There were 4 times as many adults as children in a mall. After 132 adults and 9 children went home, there was an equal number of adults and children in the mall. How many children were in the mall at first?

Answer : _____

SCORE

Section B

Do not write
in this space

For questions 11 to 12, show your working clearly and write your answers in the spaces provided. The number of marks available is shown in brackets [] at the end of each question or part-question.
(6 marks)


11. In a school hall, chairs were arranged in 9 equal rows. Each row has 14 chairs.
- (a) How many chairs were there in the hall?
 - (b) Sam rearranged all the chairs into 7 equal rows. How many chairs were there in each row?

Answer : (a) _____ [1]

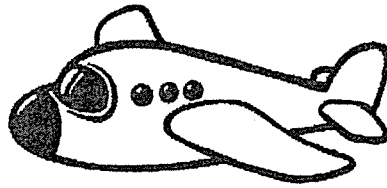
(b) _____ [2]

12. Harry has \$54.30.
He wants to buy both the toy car and toy aeroplane.

Do not wr
in this spe



Toy car
\$31.95



Toy aeroplane
\$29.80

- (a) What is the total cost of a toy car and a toy aeroplane?
(b) How much more money does Harry need?

Answer : (a) _____ [1]

(b) _____ [2]

End of Paper

SCORE

ANSWER KEY

YEAR : 2021
LEVEL : Primary 3
SCHOOL : Pei Chun Public School
SUBJECT : MATHEMATICS
TERM : Weighted Assessment 2

Q1	$8 \times 13 = 104$	Q2	$749 \div 7 = 107$
Q3	\$2.45	Q4	$10 - 7.85 = \$2.15$
Q5	\$6.15	Q6	$2.45 + 1.60 = \$4.05$
Q7	$34 \times 5 = 170$	Q8	$348 \times 3 = 1044$ $1044 + 348 = 1392$
Q9	$74 \div 6 = 12R2$ Ans : 2	Q10	$132 - 9 = 123$ $123 \div 3 = 41$
Q11	(a) $14 \times 9 = 126$ (b) $126 \div 7 = 18$	Q12	(a) $31.95 + 29.80 = \$61.75$ (b) $61.75 - 54.30 = \$7.45$

/
END