



NAN HUA PRIMARY SCHOOL
SEMESTRAL ASSESSMENT 1 – 2017
PRIMARY 5

MATHEMATICS

Paper 1

Section A: 15 Multiple Choice Questions (20 marks)

Section B: 15 Short Answer Questions (25 marks)

Total Time for Paper 1: 1 Hour

INSTRUCTION TO CANDIDATES

1. Write your name and index number in the space provided.
2. Do not turn over the page until you are told to do so.
3. Follow all instructions carefully.
4. Answer all questions.
5. Shade your answers in the Optical Answer Sheet (OAS) provided for Questions 1-15.
6. You are not allowed to use calculator for Paper 1.

Marks Obtained


Paper 1	Booklet A		/ 45
	Booklet B		
Paper 2			/ 55
Total			/ 100

Name : _____ ()

Class : 5 _____

Date : 9 May 2017

Parent's Signature : _____



Section A (20 marks)

Questions 1 to 10 carry 1 mark each. Questions 11 to 15 carry 2 marks each.
For each question, four options are given. One of them is the correct answer.
Make your choice and shade your answer (1, 2, 3 or 4) on the Optical Answer Sheet.



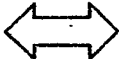

1. Which of the following has the digit "5" in the hundred thousands place?

- (1) 3 652 148
- (2) 5 907 346
- (3) 6 415 092
- (4) 8 520 408

2. The cost of a set of television is \$1 459. Round the cost of the set of television to the nearest hundred dollars.

- (1) \$ 1 400
- (2) \$ 1 460
- (3) \$ 1 500
- (4) \$ 1 550

3. Which of the following is **not** symmetrical?

- (1) 
- (2) 
- (3) 
- (4) 

4. $2\frac{1}{4} \times 3 = \underline{\hspace{2cm}}$ quarters

- (1) 6
- (2) 7
- (3) 21
- (4) 27

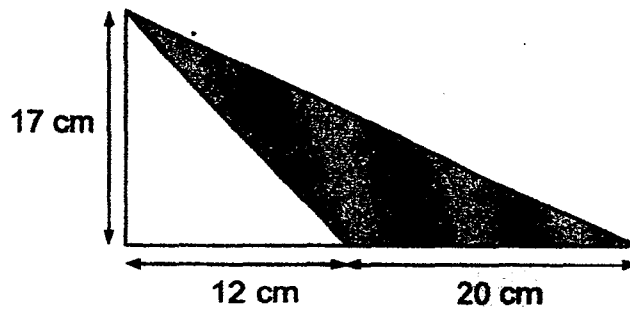
5. Find the value of $\frac{5}{6} - \frac{1}{4}$.

- (1) $\frac{1}{3}$
- (2) $\frac{1}{6}$
- (3) $\frac{3}{4}$
- (4) $\frac{7}{12}$

6. There are 90 prefects. 42 of these prefects wear spectacles. What is the ratio of the number of prefects who do not wear spectacles to the number of prefects who wear spectacles?

- (1) 7 : 8
- (2) 8 : 7
- (3) 7 : 15
- (4) 8 : 15

7. What is the area of the shaded triangle?



- (1) 102 cm²
- (2) 170 cm²
- (3) 272 cm²
- (4) 340 cm²

8. Daryl had $\frac{2}{7}$ of his salary left after spending \$500. What was his salary?

- (1) \$ 700
- (2) \$ 1 250
- (3) \$1 000
- (4) \$1 750

9. What is the missing number in the box?

$$18 : 30 = \boxed{?} : 40$$

- (1) 28
- (2) 24
- (3) 3
- (4) 9

10. 9 tenths is _____ hundredths more than 0.4

(1) 500

(2) 50

(3) 5

(4) 0.5

11. 25 pots of plants were placed in a row at equal distance apart. The distance between the 1st and the 5th pot was 240 cm. What was the distance between the 1st and the 25th pot of plant?

(1) 1 152 cm

(2) 1 200 cm

(3) 1 440 cm

(4) 1 500 cm

12. A bus can either carry 40 children or 24 adults. If there are already 15 children in the bus, what is the maximum number of adults that can be in the bus?

(1) 15

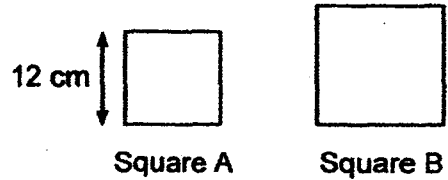
(2) 9

(3) 3

(4) 6

13. The ratio of the length of Square A to the length of Square B is 3 : 4.
If the length of Square A is 12 cm, what is the perimeter of Square B ?

- (1) 16 cm
- (2) 36 cm
- (3) 48 cm
- (4) 64 cm



14. The pattern below is formed with the following pictures.




1st

What is the 80th picture in the pattern?

- (1)
- (2)
- (3)
- (4)

15. The figure below is made up of 2 similar triangles and 6 similar rectangles. What is the ratio of the unshaded part to the whole figure?



- (1) 2 : 3
- (2) 2 : 5
- (3) 3 : 2
- (4) 3 : 5

Section B (25 marks)

Do not write
in this space

Questions 16 to 20 carry 1 mark each. Write your answers in the spaces provided.
For questions which require units, give your answers in the units stated.

16. Find the product of $\frac{3}{7}$ and $\frac{7}{10}$.

Ans: _____

17. Express $2\frac{6}{25}$ as a decimal.

Ans: _____

18. Express 18 cm out of 3 m as a fraction in the simplest form.

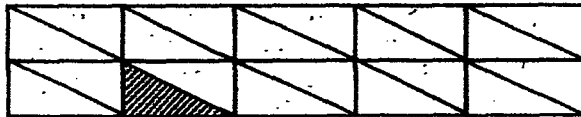
Ans: _____

19. 5 children shared 8 pizzas. What fraction of the pizzas did each child get?

Do not write in this space

Ans: _____

20. How many more triangles must be shaded so that $\frac{3}{4}$ of the figure below is shaded?

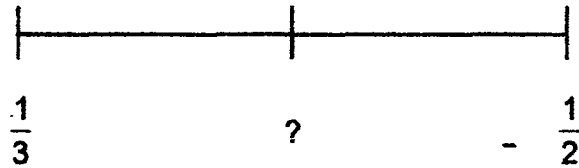


Ans: _____

Questions 21 to 30 carry 2 marks each. Show your working clearly in the space provided for each question and write your answers in the spaces provided. For questions which require units, give your answers in the units stated.

Do not write
in this space

21. In the number line below, find the fraction exactly halfway between $\frac{1}{3}$ and $\frac{1}{2}$.



Ans: _____

22. Mrs Rosna had a piece of cloth 60 m long. She used $\frac{2}{5}$ of it to make cushion covers and $\frac{1}{3}$ of it for some dresses. How much of the cloth was left?

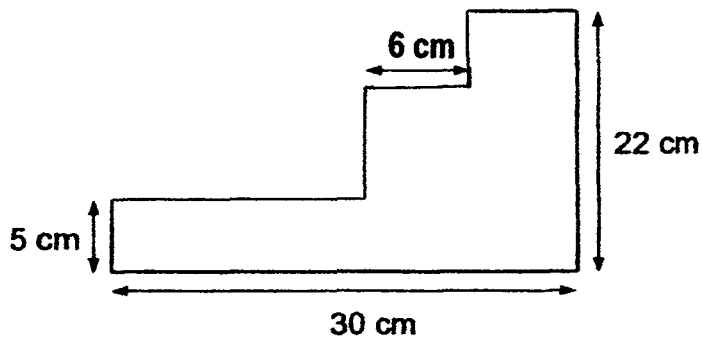
Ans: _____ m

23. Sally is 11 years old. Janice is 15 years old. Find the ratio of Sally's age to Janice's age in 5 years' time. (Give your answer in the simplest form.)

Do not write
in this space

Ans: _____

24. Find the perimeter of the figure below. (Figure is not drawn to scale.)



Ans: _____ cm

25. Wei Ming spent $\frac{2}{5}$ of his pocket money on clothes and $\frac{5}{6}$ of the remainder on food and transport. He had \$220 left in the end. What was his pocket money at first?

Do not write
in this space

Ans: \$ _____

26. The ratio of the number of fruit tarts to the number of egg tarts baked was 9 : 5. If there were 124 more fruit tarts baked than egg tarts, how many egg tarts were baked?

Ans: _____

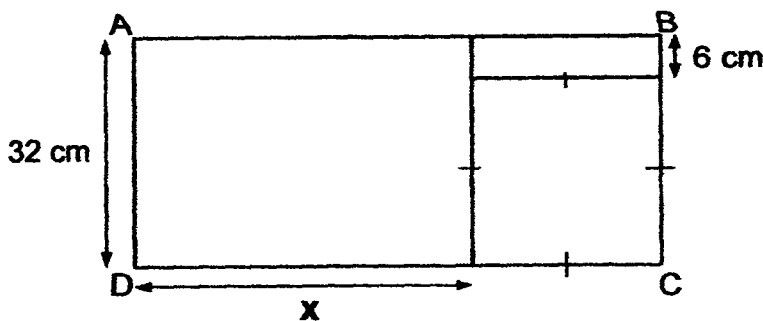
27. Luke cut his birthday cake into quarters. He then cut one of the quarters into 3 equal pieces. His uncle ate 2 of the smaller pieces of the cake. What fraction of his birthday cake was left? Give your answer in its simplest form.

Do not write in this space

Ans: _____



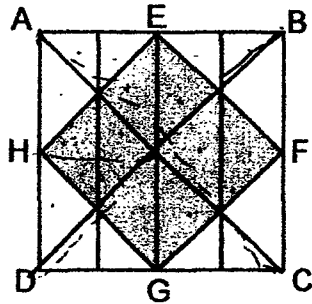
28. Figure ABCD, not drawn to scale, is made up of one square and two rectangles. The figure has a perimeter of 206 cm. What is the value of x ?



Ans: _____ cm



29. The figure below is made up of Square ABCD and Square EFGH. EFGH are the midpoints of Square ABCD. Find the ratio of the area of the Square EFGH to the area of Square ABCD.



Ans: _____



30. Mr Lim bought an equal number of key chains and notebooks.
 He gave $\frac{1}{4}$ of the key chains and $\frac{5}{6}$ of the notebooks to his students.
 He gave 21 more notebooks than keychains. How many key chains and notebooks did Mr Lim buy altogether?

Ans: _____



**SEMESTRAL ASSESSMENT 1 – 2017
PRIMARY 5**

MATHEMATICS

Paper 2

Total Time for Paper 2: 1 hour 30 minutes

5 Short Answer Questions (10 marks)

12 Structured / Long Answer Questions (45 marks)

INSTRUCTION TO CANDIDATES

- 1. Write your name and index number in the space provided.**
- 2. Do not turn over the page until you are told to do so.**
- 3. Follow all instructions carefully**
- 4. Answer all questions and show your workings clearly.**
- 5. You are allowed to use a calculator.**

Paper 2 (55 marks)

Questions 1 to 5 carry 2 marks each. Show your workings clearly and write your answer in the space provided. For questions which require units, give your answers in the units stated. (10 marks)

Do not write
in this space

1. Write 364 912 in words.

2. Write down all the factors of 27.

Ans: _____

3. Share 390 oranges equally among 9 people.
a) How many oranges will each person get?
b) How many oranges will be left over?

Ans: (a) _____

(b) _____

4. Jane saved \$183.60. She donated $\frac{5}{6}$ of her savings to charity.

How much money did she donate?

Give your answer to the nearest ten dollar.

Ans: \$ _____

Do not write
in this space

5. Joyce and Tina had an equal amount of money
Each day, Joyce spent \$24 and Tina spent \$28.
When Tina spent all her money, Joyce still had \$64 left.
In how many days did Tina spend all her money?

Ans: _____

For questions 6 to 17, show your working clearly and write your answers in the spaces provided. The number of marks available is shown in brackets [] at the end of each question or part-question. (45 marks)

Do not write in this space

6. 20 children share some cards equally. When another child joins them, they each get 2 fewer cards. How many cards are they sharing altogether?

Ans: _____ [3]

7. There is a total of 43 bicycles and tricycles.
There is a total of 111 wheels. How many tricycles are there?



Ans: _____ [3]

8. 3 books and 2 files cost \$78.
1 book and 3 files cost \$40.
What was the cost of a book?

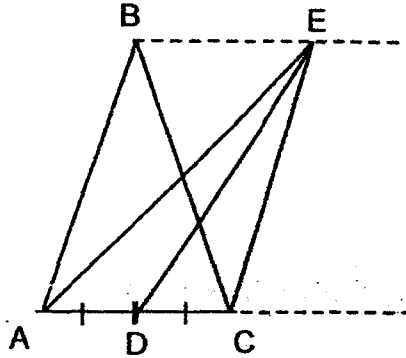
Do not write
in this space

Ans: _____ [3]

9. There were 8 times as many pupils as teachers in a school event.
There were 3 times as many girls as boys.
There were 70 fewer teachers than girls.
How many people were at the event?

Ans: _____ [3]

10. In the figure below (not drawn to scale), $AD = DC$ and the area of triangle ABC is 120 cm^2 . Find the area of (a) triangle AEC and (b) triangle DEC .



Ans:(a) _____ [1]

(b) _____ [2]

Do not write
in this space



11. There was 60 ml of water in beaker A and 100 ml of water in beaker B.
- (a) Find the ratio of volume of water in beaker A to beaker B.
- (b) After some water was added to both beakers, beaker A had 90 ml of water. The ratio of volumes of water in both beakers remained the same. How much water was added to beaker B?


Ans: (a) _____ [1]

(b) _____ [3]



Do not write
in this space

12. ACDF is a rectangle. AFE and BCD are both identical triangles.
The ratio of the length of DC to the length of DE is 2 : 5
Find the area of the shaded part.



Ans: _____ [4]

13. Sue had some blue and red beads. She sold an equal number of blue and red beads. She had $\frac{2}{5}$ of the blue beads and $\frac{3}{4}$ of the red beads left. What fraction of the beads she had were not sold?

Ans: _____ [4]

Do not write
in this space

14. There were 20 questions in a test.
For every question answered correctly, 2 points were awarded.
For every question answered incorrectly, 1 point was deducted.
Jeremy scored 31 points. How many questions did he answer correctly?

Ans: _____ [4]

15. Teddy and Lynn had some seashells each. If Teddy gave Lynn 150 seashells, both would have an equal number of seashells. If Lynn gave Teddy 150 seashells, Teddy would have 3 times as many seashells as Lynn. How many seashells did Lynn have at first?

Ans: _____ [4]

16. Study the diagram below which are made up of squares.

Figure 1 has a perimeter of 40 cm.

Do not write
in this space

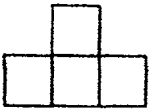


Figure 1

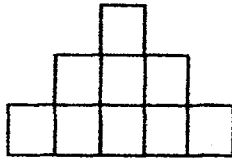


Figure 2

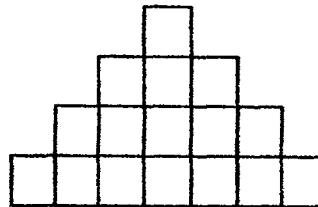


Figure 3

Complete the table below by filling in the blank.

Figure	Number of sides of figures	Perimeter
Figure 1	10	40 cm
Figure 2	16	64 cm
Figure 3	22	a) ?
Figure 4	b) ?	c) ?

d) Which figure will give a perimeter of 304 cm?

Ans: (a) _____ [1]

(b) _____ [1]

(c) _____ [1]

(d) _____ [2]



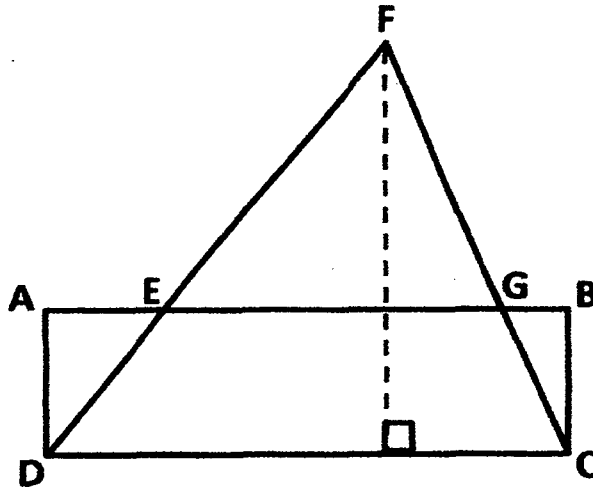
17. In the figure, ABCD is a rectangle.

The area of EGCD is $\frac{5}{9}$ of the area of triangle DFC.

It is also $\frac{4}{5}$ of the area of rectangle ABCD.

The area of the whole figure is 492 cm^2

What is the area of triangle EFG?



Do not write
in this space

Ans: _____ [5]



End - of - Paper



School: Nan Hua
Level: P5
Subject: Maths
Term: SA1
Year: 2017

Q1	Q2	Q3	Q4	Q5
4	3	2	4	4
Q6	Q7	Q8	Q9	Q10
2	2	1	2	2
Q11	Q12	Q13	Q14	Q15
3	1	4	1	4

Q16) $\frac{3}{10}$ Q17) 2.24 Q18) $\frac{3}{50}$ Q19) $1\frac{3}{5}$ Q20) 14 triangles
Q21) $\frac{5}{12}$ Q22) 16 m Q23) 4 : 5 Q24) 104 cm Q25) \$2200
Q26) 155 egg tarts Q27) $\frac{5}{6}$ Q28) 45 cm Q29) 1 : 2 Q30) 72

Paper 2

Q1) Three hundred and sixty four thousand nine hundred and twelve.

Q2) 1, 3, 9, 27

Q3) a) 43 oranges
b) 3 oranges

Q4) $183.60 \div 6 = 30.60$
 $5 \times 30.60 = 153$
 $153 \approx 150 \rightarrow \150

Q5) $28 - 24 = 4$
 $64 \div 4 = 16$ days

Q6) $20 \times 2 = 40$
 $40 \times (20 + 1) = 840$ cards

Q7) $43 \times 2 = 86$
 $111 - 86 = 25$
 $3 - 2 = 1$
 $25 \div 1 \rightarrow 25$ tricycles

Q8) \$22

Q9) $3 + 1 = 4$
 $4 \times 2 = 8$
 $3 \times 2 = 6$
 $1 \times 2 = 2$
 $6 - 1 = 5$
 $70 \div 5 = 14$
 $8 + 1 = 9$
 $9 \times 14 = 126$ people

- Q10) a) 120 cm^2
 b) 60 cm^2
- Q11) a) $3 : 5$
 b) $90 \div 3 = 30$
 $30 \times 5 = 150$
 $150 - 100 = 50 \text{ m l}$
- Q12) $8 \div 2 = 4$
 $4 \times 5 = 20$
 $20 + 8 = 28$
 $8 \times 28 = 224$
 $\frac{1}{2} \times 8 \times 8 = 32$
 $32 \times 2 = 64$
 $224 - 64 = 160 \text{ cm}^2$
- Q13) $\frac{1}{4} = \frac{3}{12}$
 $12 - 3 = 9$
 $5 + 12 = 17$
 $2 + 9 = 11$
 $\frac{11}{17}$
- Q14) 17 questions
- Q15) $150 \times 2 = 300$
 $300 \times 2 = 600$
 $3 - 1 = 2$
 $600 \div 2 = 300$
 $300 + 150 = 450 \text{ seashell}$
- Q16) a) $22 \times 4 = 88 \text{ cm}$
 b) $22 + 6 = 28 \text{ sides}$
 c) $28 \times 4 = 112 \text{ cm}$
 d) $76 \times 4 = 304$
 $76 - 10 = 66$
 $66 \div 6 = 11$
 $11 + 1 = \text{figure } 12$
- Q17) $\frac{4}{5} = \frac{20}{25}$
 $\frac{5}{9} = \frac{20}{36}$
 $25 - 20 = 5$
 $36 + 5 = 41$
 $492 \div 41 = 12$
 $41 - 25 = 16$
 $16 \times 12 = 192 \text{ cm}^2$

End