

Name : _____ ()

Class : Primary 5 _____

Primary 5 Mathematics

2017 Continual Assessment One

Paper 1

Booklet A

28 February 2017

15 questions

20 marks

TOTAL TIME FOR BOOKLETS A & B : 1 HOUR

INSTRUCTIONS TO CANDIDATES

DO NOT TURN OVER THIS PAGE UNTIL YOU ARE TOLD TO DO SO.

FOLLOW ALL INSTRUCTIONS CAREFULLY.

ANSWER ALL QUESTIONS.

SHADE YOUR ANSWERS IN THE OPTICAL ANSWER SHEET (OAS)
PROVIDED.

THE USE OF CALCULATORS IS **NOT** ALLOWED.

This booklet consists of 7 printed pages including the cover page.

Questions 1 to 10 carry 1 mark each. Questions 11 to 15 carry 2 marks each. For each question, four options are given. One of them is the correct answer. Make your choice (1, 2, 3 or 4). Shade the correct oval (1, 2, 3, or 4) on the Optical Answer Sheet.

(20 marks)

1. Five hundred and two thousand, seven hundred and thirteen in numerals is _____.

- (1) 52 713
- (2) 502 713
- (3) 520 713
- (4) 5 002 713

2. $8\ 219\ 406 = 8\ 000\ 000 + \underline{\hspace{2cm}} + 406$

What is the missing number?

- (1) 21 900
- (2) 219 000
- (3) 2 190 000
- (4) 21 900 000

3. Mrs Chan bought a car for \$108 000 when rounded to the nearest \$1000.

Which of the following is the possible value of the car?

- (1) \$107 006
- (2) \$107 499
- (3) \$108 255
- (4) \$108 620

4. Sandy is thinking of a 7-digit number. The digit in the millions place is twice the digit in the ten thousands place. Which one of the following numbers is Sandy thinking of?

- (1) 4 732 509
- (2) 4 260 759
- (3) 4 173 529
- (4) 4 023 759

5. Express 7.04 as a fraction.

- (1) $7\frac{1}{25}$
- (2) $7\frac{1}{250}$
- (3) $7\frac{2}{5}$
- (4) $7\frac{37}{50}$

6. $31.4 =$ _____ tenths

- (1) 314
- (2) 31
- (3) 3
- (4) 4

7. Which of the following numbers are arranged from the smallest to the largest?

(1) 0.76 , 7.06 , 0.076 , 0.706

(2) 7.06 , 0.76 , 0.706 , 0.076

(3) 0.076 , 0.76 , 0.706 , 7.06

(4) 0.076 , 0.706 , 0.76 , 7.06

8. Round 9.805 to 2 decimal places.

(1) 9.80

(2) 9.81

(3) 9.90

(4) 9.91

9. Kym, Lydia and Maria shared \$380. Kym received \$120. Lydia received \$42 less than Maria. Find the amount of money Lydia received.

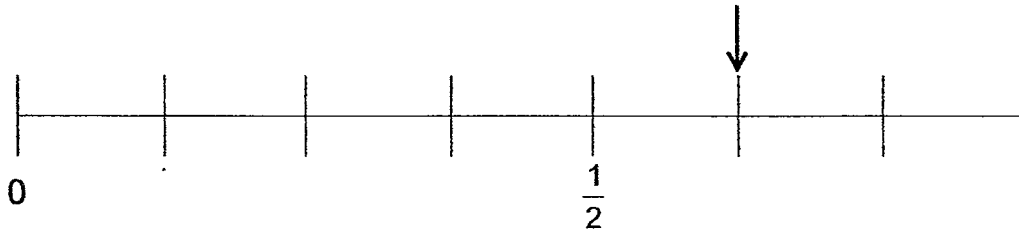
(1) \$88

(2) \$109

(3) \$130

(4) \$151

10. In the number line below, what is the fraction indicated by the arrow?



- (1) $\frac{1}{3}$
- (2) $\frac{3}{4}$
- (3) $\frac{5}{8}$
- (4) $\frac{6}{7}$

11. Find the value of A.

$$\frac{31}{12} = \frac{3}{2} + \frac{\boxed{A}}{12}$$

- (1) 49
- (2) 28
- (3) 18
- (4) 13

12. Which one of the following fractions is greater than $\frac{1}{2}$ but smaller than $\frac{3}{4}$?

(1) $\frac{3}{8}$

(2) $\frac{4}{5}$

(3) $\frac{5}{10}$

(4) $\frac{7}{12}$

13. Jasmin had some straws. She packed $\frac{4}{9}$ of them equally into 3 bundles. Each bundle had 24 straws. How many straws did she have at first?

(1) 162

(2) 216

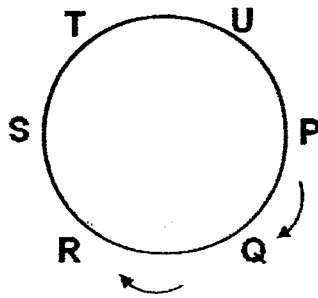
(3) 360

(4) 648

14. There were 960 balloons at a funfair. 448 of the balloons were yellow in colour and the rest were red or blue. There were 3 times as many red balloons as blue balloons. Which of the following number statements shows the number of blue balloons?

- (1) $(960 - 448) \div 3$
- (2) $(960 - 448) \div 4$
- (3) $960 - 448 \div 3 + 1$
- (4) $960 - 448 \div 3 - 1$

15. A bag of 75 marbles was shared among 6 children. P took a marble first and passed on the bag in a clockwise direction, as shown in the figure below. Each child took one marble at a time. How many marbles would R get when no marble was left in the bag?



- (1) 10
- (2) 12
- (3) 13
- (4) 15

**** END OF BOOKLET A****

Name : _____ ()

Class : Primary 5 _____

Primary 5 Mathematics
2017 Continual Assessment One
Paper 1
Booklet B
28 February 2017

Booklet A	20
Booklet B	25
Total (Paper 1)	45

Parent's / Guardian's Signature

15 questions
25 marks

TOTAL TIME FOR BOOKLETS A & B : 1 HOUR

INSTRUCTIONS TO CANDIDATES

DO NOT TURN OVER THIS PAGE UNTIL YOU ARE TOLD TO DO SO.
FOLLOW ALL INSTRUCTIONS CAREFULLY.
ANSWER ALL QUESTIONS.
WRITE YOUR ANSWERS IN THIS BOOKLET.
THE USE OF CALCULATORS IS **NOT** ALLOWED.

This booklet consists of 8 printed pages including the cover page.

Questions 16 to 20 carry 1 mark each. Write your answers in the spaces provided.
For questions which require units, give your answers in the units stated.

(5 marks)

Do not
write in
this
space

16. Find the value of 170×500 .

Ans : _____

17. Find the value of $3 \div 8$. Express your answer as a decimal.

Ans : _____

18. Arrange the cards shown below to form the **smallest** four-digit whole number that is divisible by 5. Each digit should be used once only.



Ans : _____



19. A piece of rope measuring 12.18 m is cut equally into 6 smaller pieces. What is the length of each smaller piece of rope?

Do not
write in
this
space

Ans : _____ m

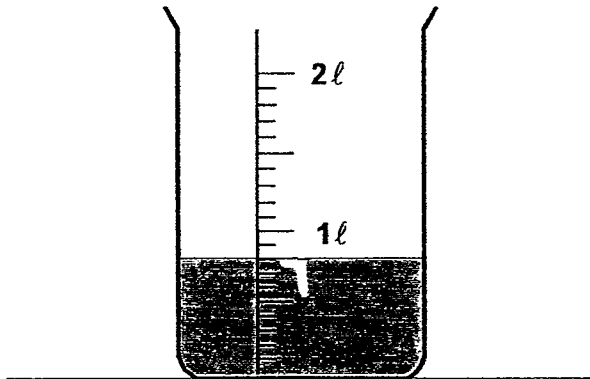
20. Find the value of $6 + 24 \div 6 \times 2 - 3$.

Ans : _____

Questions 21 to 30 carry 2 marks each. Show your working clearly and write your answers in the spaces provided. For questions which require units, give your answers in the units stated. (20 marks)

Do not write in this space


21. The figure below shows a container filled with some water. How much more water is needed to fill the container with 2 l of water? Leave your answer as a decimal.



Ans : _____ l

22. 20 pupils were each given 15 tickets for a school concert to sell. 5 of them sold 10 tickets each and the rest sold all their tickets. How many tickets were sold?

Ans : _____



23. At a science camp, participants are divided into Team A and Team B. $\frac{2}{7}$ of the participants are in Team A. There are 114 more participants in Team B than Team A. How many participants are there in Team B?

Do not
write in
this space

Ans : _____

24. The table below shows the number of children attending art and piano classes at an enrichment centre. What fraction of the children at the centre are girls? Express your answer in its simplest form.

Class	Boys	Girls
Art	9	10
Piano	6	8

Ans : _____



25. The product of three numbers is 5400. Two of the numbers are 200 and 9. Find the third number.

Do not
write in
this space

Ans : _____

26. Nathan and Michael were jogging at the stadium. Nathan jogged 1.8 km and Michael jogged 0.85 km further than Nathan. Find the total distance covered by the two boys.

Ans : _____ km

27. 4 cheese cakes were shared equally among 6 children. What fraction of a cake did each child get? Express your answer in its simplest form.

Ans : _____



28. Melanie used some white and grey tiles to form figures that follow a pattern. The first three figures are shown below.

Do not write in this space

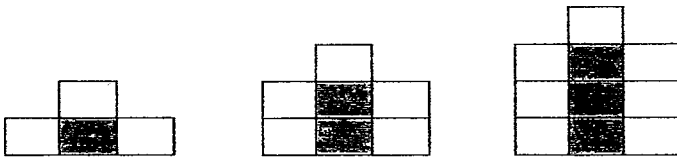


Figure 1

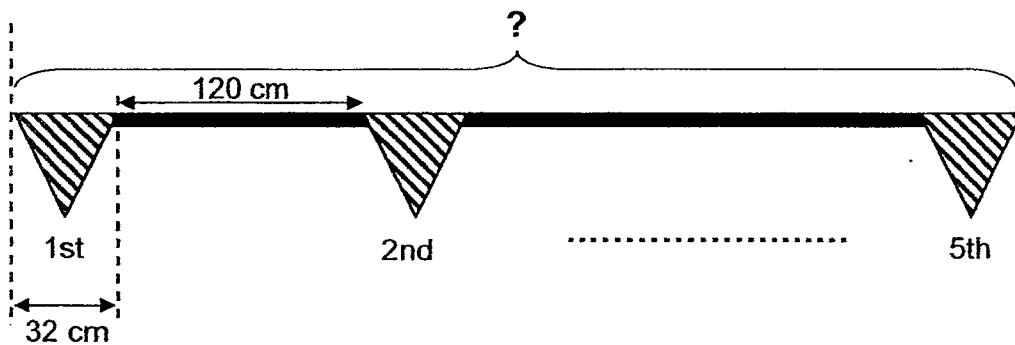
Figure 2

Figure 3

How many white tiles would she need to form Figure 7?

Ans : _____

29. Five identical flags were hung on a pole as shown below. The flags were placed 120 cm equally apart. What was the length of the pole?



Ans : _____ cm



30. Irene and Jane have 300 stickers altogether. Irene has 4 times as many stickers as Jane. How many stickers must Irene give Jane so that they have an equal number of stickers?

Do not
write in
this space

Ans : _____

Name : _____ ()

Class : Primary 5 _____

Primary 5 Mathematics
2017 Continual Assessment One
Paper 2
28 February 2017

Paper 1	45
Paper 2	55
Total	100

Parent's / Guardian's Signature

TOTAL TIME FOR PAPER 2 : 1 HOUR 30 MINUTES

INSTRUCTIONS TO CANDIDATES

DO NOT TURN OVER THIS PAGE UNTIL YOU ARE TOLD TO DO SO.
FOLLOW ALL INSTRUCTIONS CAREFULLY.
ANSWER ALL QUESTIONS.
WRITE YOUR ANSWERS IN THIS BOOKLET.
THE USE OF AN APPROVED CALCULATOR IS EXPECTED, WHERE APPROPRIATE.

This booklet consists of 15 printed pages including the cover page.

Questions 1 to 5 carry 2 marks each. Show your working clearly and write your answers in the spaces provided. For questions which require units, give your answers in the units stated.

(10 marks)

Do not
write in
this space

1. There are 40 principals and 128 teachers at a talk. All the principals are women. $\frac{5}{8}$ of the teachers are men. How many women are there altogether?

Ans : _____

2. Mrs Julie had $\frac{1}{2}$ kg of sugar. She bought another $\frac{3}{5}$ kg of sugar. She then used the sugar to bake some biscuits. In the end, she had $\frac{3}{10}$ kg of sugar left. How much sugar did she use?

Ans : _____ kg


Do not
write in
this space

3. A packet of peanuts cost \$2.55. The cost of 5 such packets of peanuts was the same as the cost of 3 packets of almonds. Each packet of almonds cost the same. How much did 1 packet of almonds cost?

Ans : \$ _____

4. Lindy thought of a mixed number. When she subtracted the mixed number from 10, she got $7\frac{2}{9}$ as the answer. If she were to subtract the same mixed number from $6\frac{1}{6}$, what would be the answer? Express your answer as a mixed number in the simplest form.

Ans : _____



5. The table below shows the difference between the digits in some 2-digit numbers.

Do not
write in
this space

Number	Working	Difference between the digits
16	$6 - 1 = 5$	5
29	$9 - 2 = 7$	7
42	$4 - 2 = 2$	2

List all the 2-digit numbers, from 50 to 69, in which the digits have a difference of 3.

Ans : _____

For questions 6 to 17, show your working clearly and write your answers in the spaces provided. The number of marks available is shown in brackets [] at the end of each question or part-question.

(45 marks)

Do not
write in
this
space

6. A box contains white and purple marbles. $\frac{4}{11}$ of the marbles are white.

There are 133 purple marbles in the box. Find the total number of marbles in the box.

Ans : _____ [3]

7. 6 identical cushion covers and 2 identical rugs cost \$88. 1 such cushion cover and 1 such rug cost \$20. What is the cost of 1 cushion cover?

Ans : _____ [3]

8. Raj bought 35 party poppers at 7 for \$66. Then he bought some light sticks at 9 for \$8. He spent a total of \$442 on the party poppers and light sticks. How many light sticks did he buy?

Do not write in this space

Ans : _____ [3]

9. Collin paid a total of \$181 for a shirt, a pair of pants and a tie. The pair of pants cost \$15 less than the shirt. The shirt cost 2 times as much as the tie. How much did the pair of pants cost?

Do not
write in
this
space

Ans : _____ [3]

10. Dilys had 117 more beads than Elaine. After Elaine gave away 75 beads, Dilys had 3 times as many beads as Elaine. How many beads did Elaine have at first?

Do not
write in
this
space

Ans : _____ [3]

11. Three children sold some muffins at a carnival. Amy sold $\frac{1}{6}$ of these muffins.

Bosco sold 30 more muffins than Amy. Cathy sold the remaining 162 muffins.

How many muffins did they sell altogether?

Do not
write in
this
space

Ans : _____ [3]

12. The table below shows the number of pens in 3 boxes, A, B and C.

Box	Number of pens
A	460
B	272
C	584

An equal number of pens were removed from each of the 3 boxes. Box C then had 4 times as many pens left as Box B. How many pens were there in Box A in the end?

Do not
write in
this
space

Ans : _____ [5]

13. There was a total of 336 red chairs and blue chairs in a school hall. There were 72 more red chairs than blue chairs. All the chairs were arranged equally in rows of 12. Each row was made up of only red chairs or blue chairs. How many rows of red chairs were there?

Do not
write in
this
space

Ans : _____ [4]

14. In March, Mr Lawry sold 45 computers. In April, he sold $\frac{2}{3}$ of the number of computers sold in March.

(a) How many computers did he sell in March and April altogether?

(b) For each computer Mr Lawry sold, he was paid \$50. For every 5 computers sold, he received an additional amount of \$90.

Find the total amount of money he received in April.

Do not write in this space

Ans : (a) _____ [2]

(b) _____ [3]



15. Mr Ong had a total number of 576 toys in 2 shops, P and Q. After he transferred 90 toys from Shop Q to Shop P, Shop P had 8 times as many toys as Shop Q. How many toys were there in Shop P at first?

Do not
write in
this
space

Ans : _____ [4]

16. Harriet, Ben and Celestine shared 318 cards equally. During a game, Ben lost 52 cards to Harriet and Celestine lost half of her cards to Harriet. How many more cards did Harriet have than Celestine in the end?

Do not
write in
this
space

Ans : _____ [4]

Do not
write in
this
space

17. A shopkeeper had some mangoes in 3 sizes. The number of medium mangoes was twice the number of large mangoes. The number of large mangoes was three times the number of small mangoes. The table below shows the prices of the mangoes.

Size	Price of 1 mango
Small	\$4
Medium	\$7
Large	\$9

He sold all the small and medium mangoes. He received \$486 from selling $\frac{1}{3}$ of the large mangoes.

- (a) How many large mangoes did he have at first?
- (b) How much more did he collect from selling the medium mangoes than the small mangoes?

Ans : (a) _____ [2]

(b) _____ [3]

**** End of Paper ****

School: ACS
 School: St Nicholas
 Level: P5
 Subject: Maths
 Term: CA1

Q1	Q2	Q3	Q4	Q5
2	2	3	4	1
Q6	Q7	Q8	Q9	Q10
1	4	2	2	3
Q11	Q12	Q13	Q14	Q15
4	4	1	2	3

- Q16) 85 000 Q17) 0.375 Q18) 5790 Q19) 2.03 m Q20) 11
- Q21) 1.2 ℓ Q22) 275 tickets Q23) 190 participants Q24) $\frac{6}{11}$ Q25) 3
- Q26) 4.45 km Q27) $\frac{2}{3}$ Q28) 15 white tiles Q29) 640 cm Q30) 90 stickers

Paper 2

Q1) $\frac{8}{8}$ (teachers) = $\frac{5}{8}$ (men) + $\frac{3}{8}$ (women)

$\frac{8}{8} \rightarrow 8$ units

8 units \rightarrow 128

1 unit $\rightarrow 128 \div 8 = 16$

3 units $\rightarrow 16 \times 3 = 48$

Total $\rightarrow 48 + 40 \rightarrow 88$ women

Q2) $\frac{1}{2} = \frac{5}{10}$ $\frac{3}{5} = \frac{6}{10}$

Total amount $\rightarrow \frac{5}{10} + \frac{6}{10} = \frac{11}{10}$

Used $\rightarrow \frac{11}{10} - \frac{3}{10} = \frac{8}{10}$ kg

Q3) 1 packet of peanuts \rightarrow \$2.55

3 packets of almonds = 5 packets of peanuts = $2.55 \times 5 = 12.75$

1 packet of almonds = $12.75 \div 3 = \$4.25$

Q4) $10 - 7\frac{2}{9} = 2\frac{7}{9}$

$6\frac{1}{6} - 2\frac{7}{9} = 3\frac{7}{18}$

Q5) 52, 58, 63, 69

- Q6) $\frac{11}{11} \rightarrow \frac{4}{11}$ (white) + $\frac{7}{11}$ (purple)
 Number of purple marbles = 133
 $\frac{7}{11} \rightarrow 7$ units = 133
 1 unit = $133 \div 7 = 19$
 Total $\rightarrow 11$ units
 11 units = $19 \times 11 = 209$ marbles
- Q7) 6 cushion covers + 2 rugs \rightarrow \$88
 1 cushion cover + 1 rug \rightarrow \$20
 2 cushion covers + 2 rugs $\rightarrow 20 \times 2 =$ \$40
 4 cushion covers $\rightarrow 88 - 40 =$ \$48
 1 cushion cover $\rightarrow 48 \div 4 =$ \$12
- Q8) Total number of part poppers he bought $\rightarrow 35$
 Number of sets he could buy $\rightarrow 35 \div 7 = 5$
 Cost of 5 sets $\rightarrow \$66 \times 5 =$ \$330
 Cost of all the light sticks $\rightarrow 442 - 330 =$ \$112
 Number of sets $\rightarrow \$112 \div 8 =$ \$14
 Number of light sticks $\rightarrow 14 \times 9 = 126$ light sticks
- Q9) $\$15 \times 4 =$ \$60
 $\$181 - \$60 =$ \$121
 $\$121 \div 5 =$ \$24.20
 $\$24.20 \times 2 =$ \$48.40
 $\$48.40 + 15 =$ \$63.40
- Q10) 2 units $\rightarrow 117 + 75 = 192$
 1 unit $\rightarrow 192 \div 2 = 96$
 Elaine $\rightarrow 96 + 75 = 171$ beads
- Q11) 4 units $\rightarrow 162 + 30 + 192 = 192$
 2 units $\rightarrow 192 \div 2 = 96$
 $96 + 192 = 288$ muffins
- Q12) 3 units $- 584 - 272 = 312$
 1 unit $\rightarrow 312 \div 3 = 104$
 Number removed from each box $\rightarrow 272 - 104 = 168$
 $460 - 168 = 292$ pens
- Q13) $336 + 72 = 408$
 $408 \div 2 = 204$
 $204 \div 12 = 17$ rows

Q14) a) $\frac{3}{3} \rightarrow 3$ units $\frac{2}{3} \rightarrow 2$ units

3 units $\rightarrow 45$

1 unit $\rightarrow 45 \div 3 = 15$

$\frac{2}{3} + \frac{3}{3} = \frac{5}{3}$ (5 units)

5 units $\rightarrow 15 \times 5 = 75$ computers

b) $30 \times \$50 = \1500

$30 \div 5 = 6$

$6 \times 90 = \$540$

$\$1500 + \$540 = \$2040$

Q15) 9 units $\rightarrow 576$

1 unit $\rightarrow 576 \div 9 = 64$

$64 + 90 = 154$

$575 - 154 = 422$ toys

Q16) $318 \div 6 = 53$

$(53 \times 2) + 52 = 158$ cards

Q17) a) 162 large mangoes

b) \$2052

End