

**MINI TEST 2**  
**Primary 2 MATHEMATICS**  
**4 MAY 2017**

25 questions

50 marks

Total time: 1 hour

NAME : \_\_\_\_\_ (     )

CLASS : PRIMARY 2 \_\_\_\_\_

**DO NOT OPEN THIS BOOKLET UNTIL YOU ARE TOLD TO DO SO.**

**FOLLOW ALL INSTRUCTIONS CAREFULLY.**

**ANSWER ALL QUESTIONS.**

**MARKS OBTAINED :**

**TOTAL : \_\_\_\_\_ / 50**

**Parent's Signature: \_\_\_\_\_**

**Section A: 15 marks**

Questions 1 to 5 carry 1 mark each. Questions 6 to 10 carry 2 marks each. Choose the correct answer and write 1, 2, 3 or 4 in the bracket provided.

1. There are \_\_\_\_\_ fives in 30.

- (1) 6
- (2) 5
- (3) 3
- (4) 4

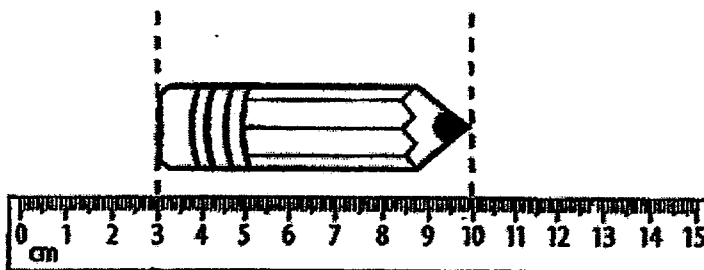
( )

2. 3 groups of 2 is the same as \_\_\_\_\_.

- (1)  $3 + 2$
- (2)  $3 \times 2$
- (3)  $2 \times 2 \times 2$
- (4)  $2 + 2 + 2 + 2$

( )

3.




The length of the pencil is \_\_\_\_\_ cm.

- (1) 11
- (2) 8
- (3) 7
- (4) 4

( )

4.

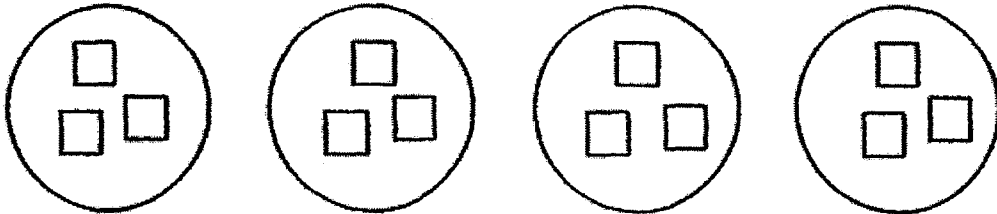


The cucumber is about \_\_\_\_\_ cm long.

- (1) 10
- (2) 11
- (3) 12
- (4) 13

( )

5. Look at the picture below. Which one of the following is correct?



- (1)  $4 \times 3$
- (2) 4 fours
- (3)  $4 + 4 + 4 + 4$
- (4) 3 groups of 4

( )

6. Look at the number pattern below.

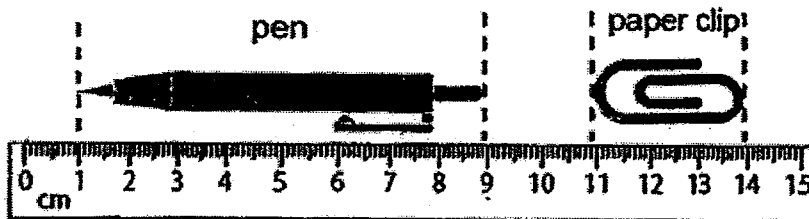
0	1	2	3	4	5
0	1	4	9	16	<u>?</u>

What is the missing number?

- (1) 10
- (2) 15
- (3) 20
- (4) 25

( )

7.

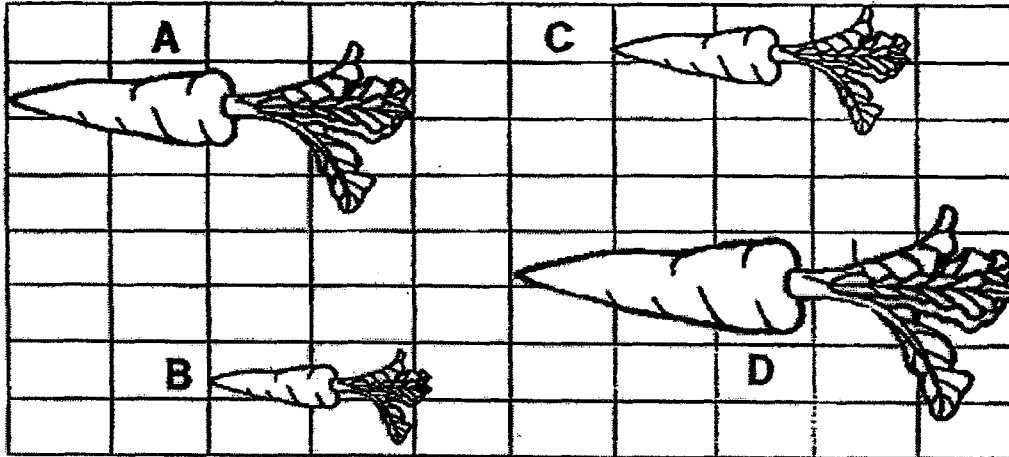


The total length of the paper clip and the pen is \_\_\_\_\_ cm.

- (1) 11
- (2) 12
- (3) 14
- (4) 18

( )

8. Arrange the carrots from the shortest to the longest.



(1) D, A, C, B

(2) D, C, B, A

(3) B, C, A, D

(4) B, A, C, D

( )

9.  $20 \div 2 = 2 \times$  \_\_\_\_\_

What is the number in the blank?

(1) 5


(2) 8

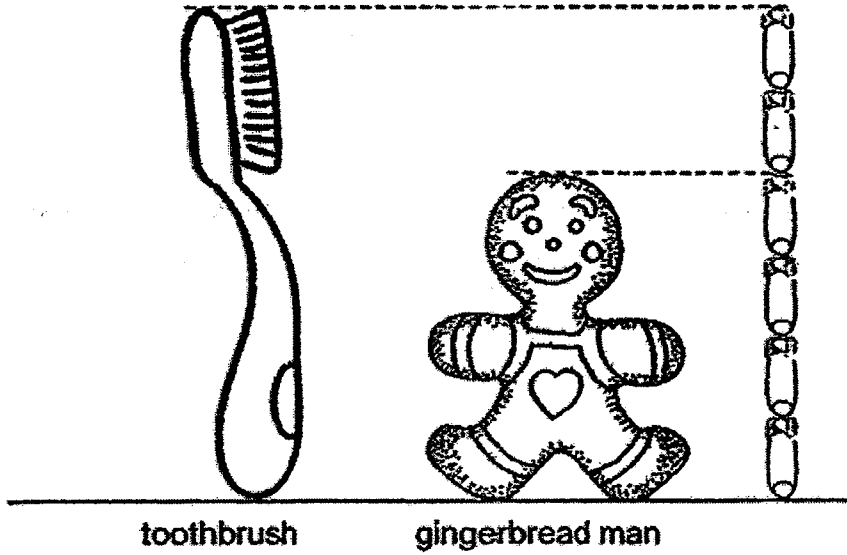
(3) 10

(4) 22

( )

10. Look at the picture carefully.

Each  is 2 cm long.




The toothbrush is \_\_\_\_\_ cm taller than the gingerbread man.

- (1) 1
- (2) 2
- (3) 3
- (4) 4

( )

**Section B: 20 marks [10 x 2 marks]**


11. Stacy has 24 strawberries. She divides them equally and gives to her 4 friends. How many strawberries did each person get?  
Circle the strawberries to show your answer.



Each person got \_\_\_\_\_ strawberries.


---

12. Choose 2 numbers and complete the multiplication equations.



$$\square \times 4 = \square$$

13. Fill in the blanks with the correct answers.

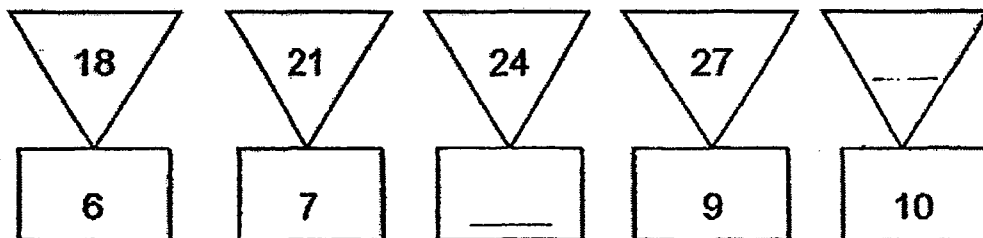


groups of 5

fives


$\times 5 =$

14. Look at the pattern given below. Fill in the blanks.






15. Use your pencil and a ruler to draw a straight line with a length of 7 cm in the box.



Start here

- 
16. Look at the picture below and form a division equation.




$$\boxed{\phantom{000}} \div \boxed{\phantom{000}} = \boxed{\phantom{000}}$$

17. There are 2 pencils and 3 erasers in each bag.  
How many pencils and erasers are there altogether in 3 such bags?

Answer: \_\_\_\_\_

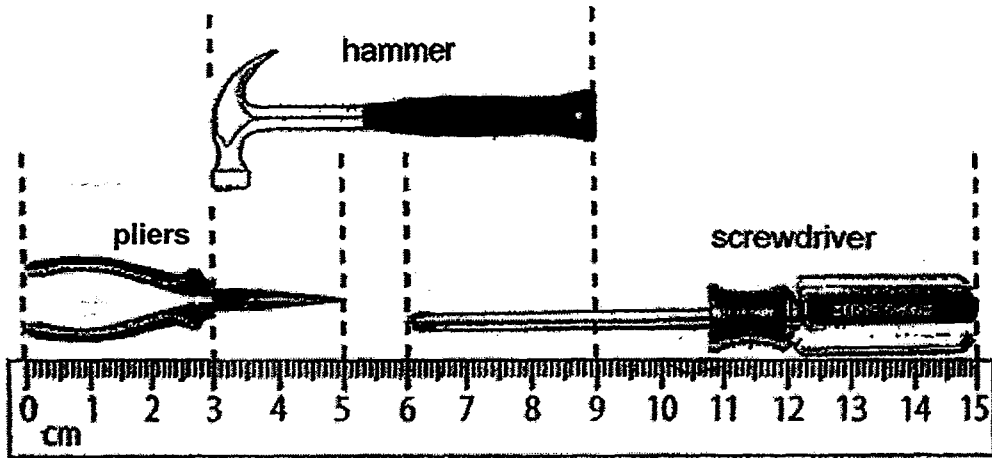
---

18. Use the string given by your teacher to trace the curved line below.  
Then measure it to find its length.



The curved line is about \_\_\_\_\_ cm long.

19. Look at the picture below carefully.  
Then fill in the blanks.



- (a) The \_\_\_\_\_ is the longest.  
(b) The total length of \_\_\_\_\_ and \_\_\_\_\_ is 15 cm.

20. Write 'm' or 'cm' on the blanks provided to show the units of measurement you would use for each object.  
The first one is done for you.

Object	Unit of Measurement
Length of my eraser	<u>cm</u>
(a) Length of a bus	_____
(b) Height of classroom door	_____
(c) Length of a handphone	_____
(d) Height of my school shoe	_____

**Section C: 15 marks [5 x 3 marks]**

Solve the following word problems.

Show all your equations (number sentences) and final answers clearly.

21. Mr Lim has 28 pots of plants in his garden.  
He arranged the pot of plants into 4 rows.  
How many pots of plants were there in each row?

There were \_\_\_\_\_ pots of plants in each row.

---

22. Sharon completed her colouring book in 9 days.  
She coloured 3 pages each day  
How many pages were there in the colouring book altogether?

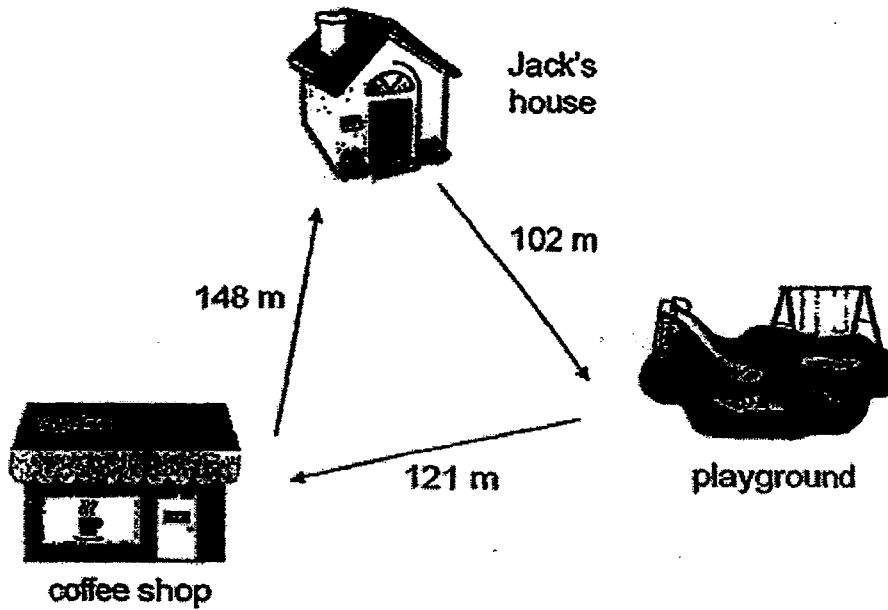
There were \_\_\_\_\_ pages in the colouring book.

23. Mrs Sim needs to pack 3 cookies and 2 cupcakes in each box.  
She needs to pack 18 cookies.  
How many cupcakes must Mrs Sim pack?  
(Hint: You may want to use the table below to find the answer)

<b>Number of cookies</b>	<b>3</b>						
<b>Number of cupcakes</b>	<b>2</b>						

Mrs Sim must pack \_\_\_\_\_ cupcakes.

24.



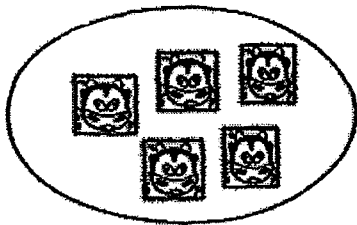

Jack walked from his house to the playground.

Then he walked to the coffee shop to get a drink before heading home.

How many metres did he walk in all?

Jack walked \_\_\_\_\_ m in all.

25. Janice pasted 6 stickers on each page shown below.  
She has 5 stickers left in the tray.  
How many stickers does she have altogether?  
(Hint: You may draw the stickers in the pages to find the answer)



She has \_\_\_\_\_ stickers altogether.

**End of Paper**  
**Please check your work**





**EXAM PAPER 2017(P2)**

**SCHOOL : MARIS STELLA**

**SUBJECT : MATHEMATICS**

**TERM : SA1**

<b>Q1</b>	<b>Q2</b>	<b>Q3</b>	<b>Q4</b>	<b>Q5</b>	<b>Q6</b>	<b>Q7</b>	<b>Q8</b>	<b>Q9</b>	<b>Q10</b>
<b>1</b>	<b>2</b>	<b>3</b>	<b>2</b>	<b>1</b>	<b>4</b>	<b>1</b>	<b>3</b>	<b>1</b>	<b>4</b>

**11)  $24 \div 4 = 6$**

**Each person got 6 strawberries.**

**12)  $9 \times 4 = 36$**

**13) 6 groups of 5**

**6 fives**

**$6 \times 5 = 30$**

**14)  $8 / 30$**

**15) **

**16)  $18 \div 3 = 6$**

**17)  $2 + 3 = 5$**

**$5 + 5 + 5 = 15$**

18)14 cm

19)a)screwdriver      b)The hammer and the screwdriver

20)a)M    b)M    c)cm    d)cm

21) $28 \div 4 = 7$

There were 7 pots of plants in each row.

22) $9 \times 3 = 27$

There were 27 pages in the colouring book.

23)Number of cookies ---- 3 , 6 , 9 , 12 , 15 , 18

Number of cupcakes---- 2 , 4 , 6 , 8 , 10 , 12

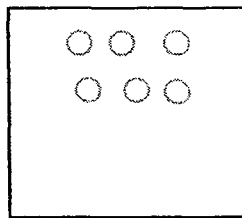
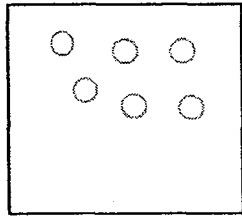
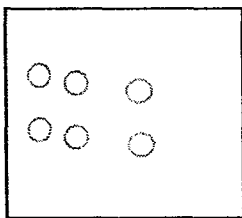
Mrs Sim must pack 12 cupcakes.

24) $102 + 121 = 223$

$223 + 148 = 371$

Jack walked 371 m in all.

25)



$6 \times 3 = 18$

$18 + 5 = 23$

She had 23 stickers altogether.