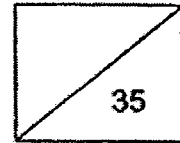


2017 Topical Review 2  
Primary 2 Mathematics



Name : \_\_\_\_\_ (    )

Class : Pr 2 \_\_\_\_\_

Duration : 50 minutes

Date : 12 May 2017

Parent's Signature : \_\_\_\_\_

---

**Section A: MCQ (14 marks)**

Questions 1 to 6 carry 1 mark each.

Questions 7 to 10 carry 2 marks each.

Write the correct option (1, 2, 3 or 4) in the brackets provided.

1. Which one of the following equations shows that 20 apples are put equally into 5 baskets?

(1)  $20 + 5$

(2)  $20 - 5$

(3)  $20 \div 5$

(4)  $20 \times 5$

(    )

2. 4 groups of 6 is the same as \_\_\_\_\_.

(1)  $4 + 4 + 4 + 4$

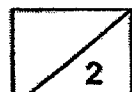
(2)  $6 + 6 + 6 + 6$

(3)  $4 \times 4 \times 4 \times 4$

(4)  $6 \times 6 \times 6 \times 6$

(    )

Marks:



3.  $1000 - 490 =$  \_\_\_\_\_

(1) 509

(2) 510

(3) 600

(4) 610

( )

4. The value of 4 hundreds and 6 ones is \_\_\_\_\_.

(1) 46

(2) 400

(3) 406

(4) 460

( )

5. Sue bought 4 boxes of cupcakes.  
There were 7 cupcakes in each box.  
How many cupcakes did Sue buy altogether?

(1) 28

(2) 21

(3) 3

(4) 11

( )

Marks:



6. Mrs Chan gave 4 pencils to each pupil.  
She gave away a total of 24 pencils.  
How many pupils did Mrs Chan have?

- (1) 6  
(2) 12  
(3) 20  
(4) 28

( )

7.



Which one of the following shows the total number of flowers?

- (1)  $4 + 3$   
(2)  $3 + 3 + 3$   
(3)  $3 \times 3$   
(4)  $4 \times 3$

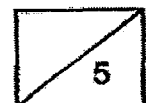
( )

8. Ken had 356 stickers at first.  
He gave John 199 stickers.  
How many stickers did Ken have left?

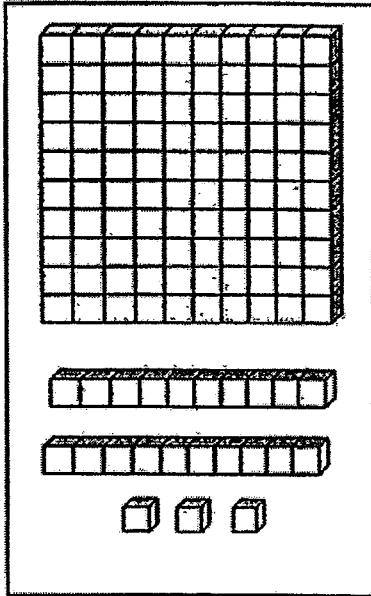
- (1) 157  
(2) 167  
(3) 243  
(4) 263

( )

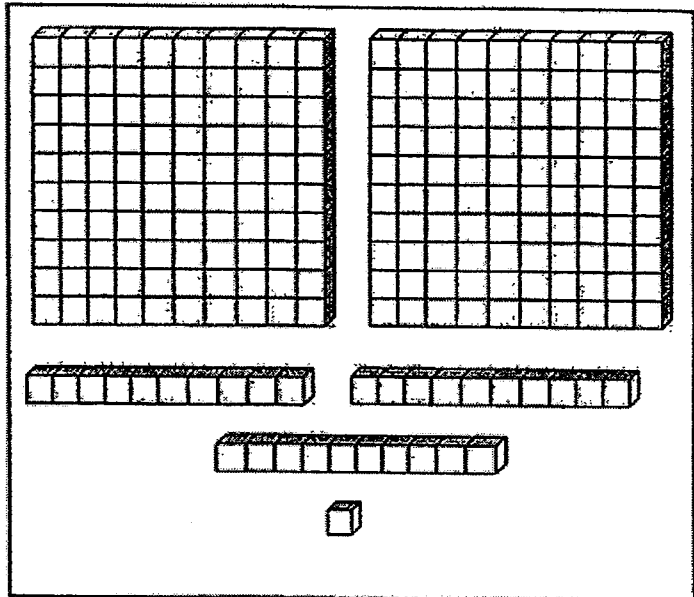
Marks:




9.



Box A



Box B

How many  are there in the 2 boxes altogether?

- (1) 108
- (2) 123
- (3) 231
- (4) 354

( )

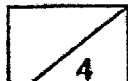
10. 2 tokens are needed to play 1 game.  
 Kerrie wants to play 8 games.  
 How many tokens will she need?



1 Game : 2 tokens

- (1) 16
- (2) 10
- (3) 6
- (4) 4

Marks:



**Section B: SAQ (12 marks)**

Questions 11 and 12 carry 1 mark each.

Questions 13 to 17 carry 2 marks each.

Write your answers in the spaces provided.

11.  $18 \div 2 =$  \_\_\_\_\_

Answer: \_\_\_\_\_


---

12.  $5 \times 7 =$  \_\_\_\_\_

Answer: \_\_\_\_\_

---

13. How many fish are there altogether?



Answer: \_\_\_\_\_ fish

---

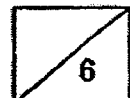
14. What is the missing number ?

$$2 \times \boxed{?} = 6$$

Answer: \_\_\_\_\_

---

Marks:



15. Mr Ali sold 345 chickens on Monday and 184 chickens on Tuesday.  
How many chickens did he sell on both days?

Answer: \_\_\_\_\_ chickens

---

16. Study the table below.

Number of chairs	1	2	3	4
Number of legs	4	8	12	16

How many legs do 9 chairs have?


Answer: \_\_\_\_\_ legs

---

17. A stall was having a sale.  
For every 3 pencils bought, Hannah was given a free eraser.  
She bought 21 pencils.  
How many free erasers did she receive?

Answer: \_\_\_\_\_ free erasers

---



**Section C: Word Problem (9 marks)**

Questions 18 to 20 carry 3 marks each.

Show your number equations clearly and complete the answer statements.

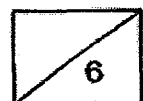
18. Ji Xiang collected 345 stamps.  
He collected 135 fewer stamps than Yun Feng.  
How many stamps did Yun Feng collect?

Yun Feng collected \_\_\_\_\_ stamps.

19. Mr Tan gave 2 apples to each child.  
There were 7 children.  
How many apples did Mr Tan give to all the children?

Mr Tan gave \_\_\_\_\_ apples to all the children.

Marks:



20. Ayden bought 30 pies.  
He gave his pies equally to 3 friends.  
How many pies did each friend get?

—— The End ——





**EXAM PAPER 2017(P2)**

**SCHOOL : MAHA BODHI**

**SUBJECT : MATHEMATICS**

**TERM : SA1**

Q1	Q2	Q3	Q4	Q5	Q6	Q7	Q8	Q9	Q10
3	2	2	3	1	1	4	1	4	1

11)9      12)35      13)24      14)3      15)529      16)36      17)7

18)345 + 135 = 480

Yun Feng collected 480 stamps.

19)7 x 2 = 14

Mr Tan gave 14 apples to all the children.

20)30 ÷ 3 = 10

Each friends got 10 pies.

