

2017 MINI TEST 2
PRIMARY 2
MATHEMATICS

Total Time: 60 minutes

INSTRUCTIONS TO CANDIDATES

Do not turn over this page until you are told to do so.

Follow all instructions carefully.

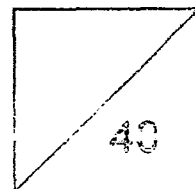
Answer all questions.

Write your answers in this booklet.

Name: _____ ()

Class: Primary 2. _____

Date: 9 May 2017



This booklet consists of 13 printed pages including this page.

Section A (10 x 1m)

Choose the correct answer for each question and write 1, 2, 3 or 4 in the brackets provided.

1. There are 8 bicycles. Each bicycle has 2 wheels.
How many wheels are there altogether?

- (1) 16
- (2) 10
- (3) 6
- (4) 4

()

2. $28 \div \square = 4$
What is the missing number in the box?

- (1) 112
- (2) 32
- (3) 24
- (4) 7

()

3. The length of a broomstick is about _____.

- (1) 1 cm
- (2) 1 m
- (3) 10 cm
- (4) 10 m

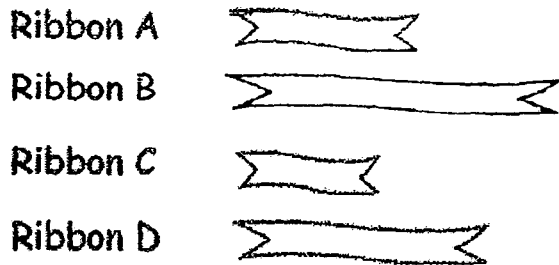
()

4. Which is not the same as 7×5 ?

- (1) 7 fives
- (2) $7 + 7 + 7 + 7 + 7 + 7 + 7$
- (3) 7 groups of 5
- (4) $5 + 5 + 5 + 5 + 5 + 5 + 5$

()

5. Which ribbon is longer than Ribbon C but shorter than Ribbon D?



- (1) Ribbon A
 - (2) Ribbon B
 - (3) Ribbon C
 - (4) Ribbon D
- ()

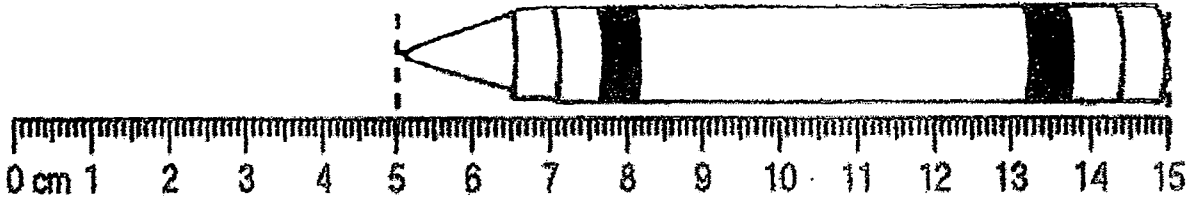
6. There are 30 sweets.
Sarah packs them into bags of 5.
How many bags of sweets does she have?

- (1) 6
 - (2) 25
 - (3) 35
 - (4) 150
- ()

7. The length of an eraser is 6 cm.
The length of the duster is 2 times the length of the eraser.
What is the length of the duster?

- (1) 8 cm
 - (2) 12 cm
 - (3) 3 cm
 - (4) 4 cm
- ()

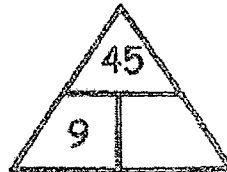
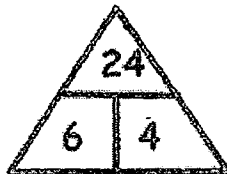
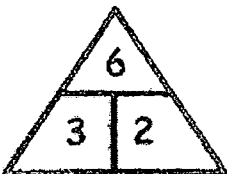
8. Look at the picture below.
What is the length of the crayon?



- (1) 5 cm
- (2) 10 cm
- (3) 15 cm
- (4) 20 cm

()

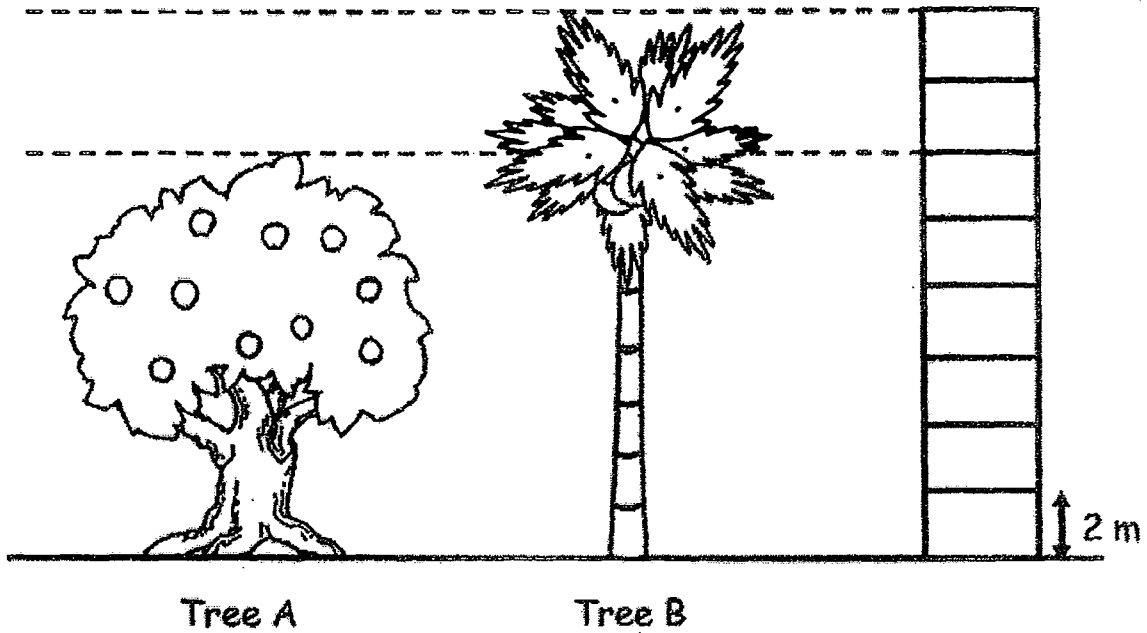
9. Look at the pattern below. Find the missing number.



- (1) 5
- (2) 6
- (3) 36
- (4) 54

()

10. Look at the picture below.



Tree A is _____ m-taller than Tree B.

- (1) 12 m
- (2) 2 m
- (3) 16 m
- (4) 4 m

()

Section B (6 x 1m)

Read the questions carefully.

For Questions 11 and 12, circle to show your answers.


11. Circle the correct equation that makes 7.

$$24 \div 4$$

$$35 \div 5$$

$$27 \div 3$$

12. Circle the ducks to show 6 equal groups.




(Go on to the next page)

Show your workings clearly.

For Questions 13 to 16, write your answers in the space provided.


13. Sally jogged 2 times around the field.
Each round was 400m.
How far did she run?



Ans: _____ m

14. The sum of two numbers is 628.
One of the numbers is 430.
What is the other number?

Ans: _____

15.  stands for 6 cupcakes,

 stands for cupcakes.

Ans: _____

16. The length of a piece of string is 36 cm.
Benjamin cuts the string into 4 equal parts.
How long is each part?

Ans: _____ cm

Section C (6 x 2m)

Read the questions carefully. Show your workings clearly.
Write your answer in the space provided.

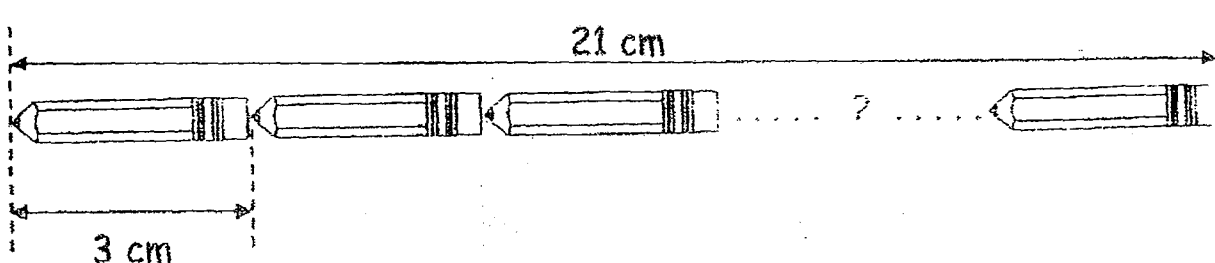
17. What does  stand for?

$$32 \div 4 = \star$$

$$\star \times 10 = \triangle$$




Ans: _____

18. Gopal arranged some pencils in a row as shown below.
The row of pencils is 21 cm long.
Each pencil is 3 cm long.
How many pencils does Gopal have?




Ans: _____

19. (a) Look at the lines drawn below. Which line is 8 cm long?

	Line X
	Line Y
	Line Z

Ans: Line _____

(b) Draw a straight line 3 cm shorter than 8 cm.



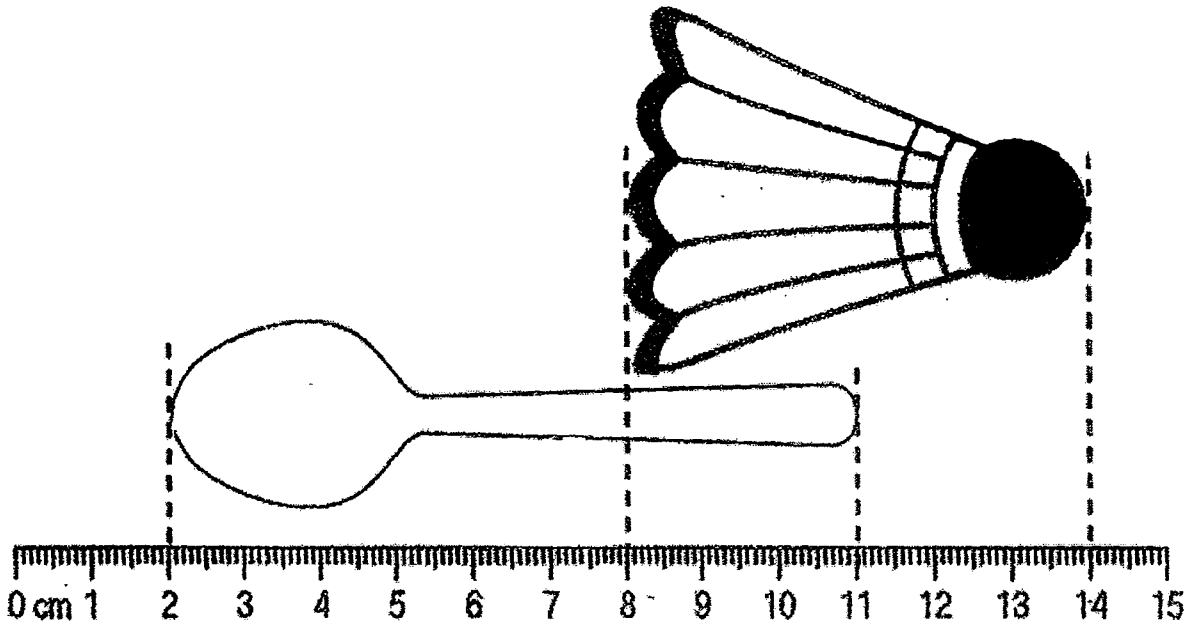
20. Ron used 4 toothpicks to form a square.
After forming 2 squares, he had 5 toothpicks left.
How many toothpicks did he have in all?



Ans: _____

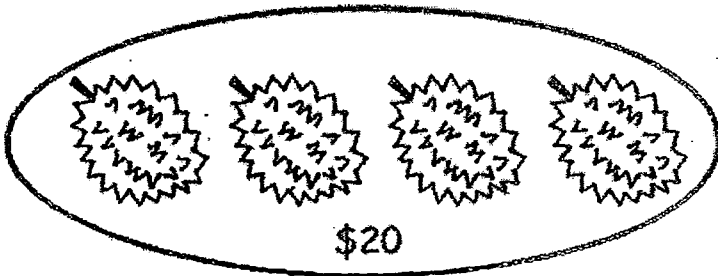
(Go on to the next page)

21. What is the total length of the two items below?



Ans: _____ cm

22. Alan bought 4 durians for \$20.
Billy bought 6 durians.
How much did Billy pay for his durians?



Ans: \$ _

Section D (4 x 3m)

Do these word problems. Show your working clearly.
You may draw models to help you.

WORKING

23. Mrs Tan bought a handbag for \$380.
She had \$245 left.
How much did she have at first?



She had \$ _____ at first.

(Go on to the next page)

24. Ali bought 8 boxes of curry puffs.
There were 3 curry puffs in each box.
How many curry puffs did he buy altogether?

WORKING

$$\square \circ \square = \square$$

He bought _____ curry puffs altogether.

25. A librarian has 70 new books to put on the shelves.
There are 7 shelves.
She puts an equal number of books on each shelf.
How many books are on each shelf?

$$\square \circ \square = \square$$

There are _____ books on each shelf.

26. Putri bought an equal number of flowers each day.
After 4 days, she had 28 flowers.
How many flowers did she buy each day?

WORKING

$$\square \circ \square = \square$$

Putri bought _____ flowers each day.

End of Paper!
Please check your work. 😊

2017 EXAM PAPER

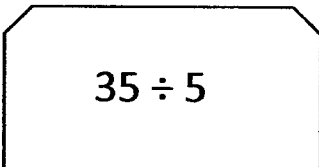

ANSWER SHEET

SCHOOL : METHODIST GIRLS' SCHOOL (PRIMARY)
LEVEL : PRI 2
SUBJECT : MATH
TERM : TEST 2 YEAR 2017



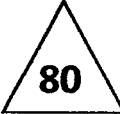

SECTION A

Q1	Q2	Q3	Q4	Q5	Q6	Q7	Q8	Q9	Q10
1	4	2	2	1	1	2	2	1	4

SECTION B

Q11	
Q12	
Q13	$400 \times 2 = 800\text{m}$
Q14	$638 - 430 = 198$
Q15	$4 \times 3 = 12$
Q16	$36 \div 4 = 9\text{cm}$

SECTION C

Q17	$32 \div 7 = $  8  $\times 10 = $  80
Q18	$21 \div 3 = 7$
Q19a	line Z
Q19b	 5cm
Q20	$4 + 4 + 5 = 13$
Q21	$9 + 6 = 15\text{cm}$
Q22	$20 \div 4 = \$5$
	$6 \times \$5 = \30

SECTION D

Q23	$\boxed{380} + \boxed{245} = \boxed{625}$
Q24	$\boxed{8} \times \boxed{3} = \boxed{24}$
Q25	$\boxed{70} \div \boxed{7} = \boxed{10}$
Q26	$\boxed{28} \div \boxed{4} = \boxed{7}$

