

**Primary Two Mathematics 2017
Review Assessment 1-1
Numbers to 1000**

Name: _____ ()

Date: _____

Class: P 2 ()

Your Score Out of 15 marks	
Parent's Signature	

SECTION A (3 × 1 mark)

For each question, four options are given. Choose the correct answer and write its number (1, 2, 3 or 4) in the brackets provided.

1. 100 less than 673 is _____.

(1) 663

(3) 773

(2) 683

(4) 573

()

2. 40 more than 857 is _____.

(1) 817

(3) 853

(2) 897

(4) 861

()

3. Arrange the numbers in order. Begin with the **smallest**.



(1) 357, 839, 362, 983

(2) 983, 839, 362, 357

(3) 357, 362, 839, 983


(4) 839, 983, 362, 357

()

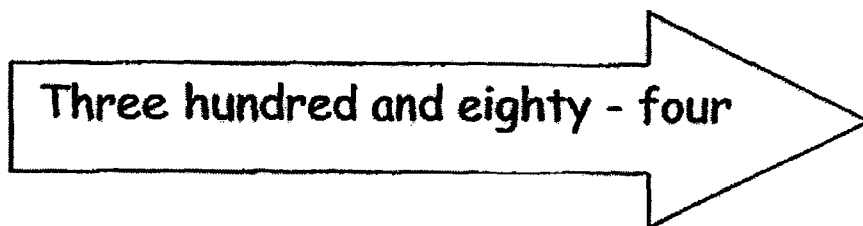
Section B: (6 X 2 marks)

Read the questions carefully. Write the correct answers in the spaces provided.

4. a) Write in words.



b) Write in numbers.



5. Fill in the blanks with **greater than** or **smaller than**

a. 567 is _____ 547.

b. 909 is _____ 990.

6. In the number 672,

a. the value of digit 6 is _____.

b. the digit _____ is in the tens place.

7. Look at the numbers in the box.

970	681	756	374
536	862	409	

The odd numbers are _____ and _____.

8. Complete the number pattern.

605, 615, 625, _____, 645, 655, 665, _____.

9. Use the numbers below to form the smallest 3 – digit number,
Use each number **once** only.

4	8	5	6	0
---	---	---	---	---

--

Primary Two Mathematics 2017
Review Assessment 2-1
Addition and Subtraction Word Problems
Multiplication Tables of 2, 3, 4, 5 and 10

Name: _____ () P2()

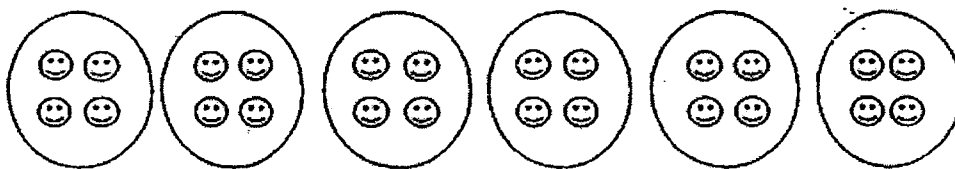
Date: _____

Your score out of 15 marks	
Parent's Signature	

Section A: (2 x 1 mark)

Choose the correct answer and write its number in the brackets provided.

1.



Look at the picture above. Which equation shows the picture correctly?

- (1) 5 fours = 20 (3) $4 + 4 + 4 + 4 + 4 + 4 + 4 = 28$
 (2) 6 groups of 4 = 24 (4) $6 \times 5 = 30$ ()

2. Uncle Ben sold 436 buns on Monday and 297 buns on Tuesday.
 How many buns did he sell on both days altogether?

- (1) 139 (3) 723
 (2) 623 (4) 733 ()

Section B: (5 x 2 marks)

Work out these questions carefully and write the answers in the blanks provided.

3.



$$\underline{\hspace{2cm}} + \underline{\hspace{2cm}} + \underline{\hspace{2cm}} + \underline{\hspace{2cm}} = \underline{\hspace{2cm}}$$

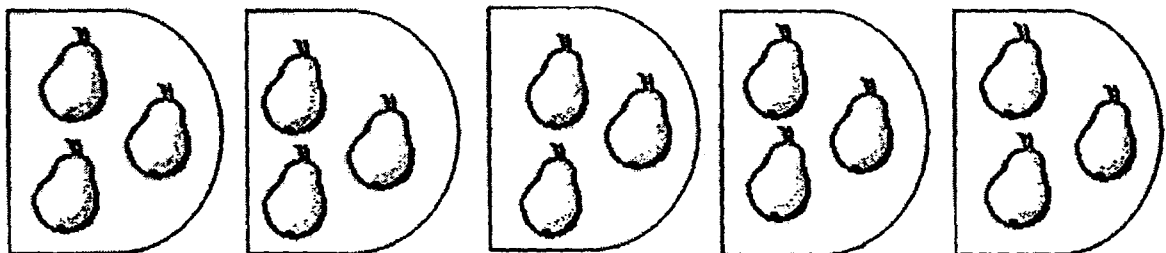
$$\underline{\hspace{2cm}} \times \underline{\hspace{2cm}} = \underline{\hspace{2cm}}$$

4. Lily collected 905 stamps. She gave away 269 stamps.
How many stamps did she have left?



stamps

5.



Write a multiplication sentence for the picture above.

$$\square \bigcirc \square = \square$$

6. (a) $8 \times 5 = \underline{\hspace{2cm}}$

(b) $10 \times 10 = \underline{\hspace{2cm}}$

7. Mrs Tan baked 365 cupcakes. Mrs Lim baked 133 more cupcakes than Mrs Tan.
How many cupcakes did Mrs Lim bake?



Section C: (1 x 3 marks)

Show all number sentences and working clearly in the spaces provided.

8. There were 300 men watching a concert. There were 150 fewer men than women watching the concert.

- (a) How many women were watching the concert?

$$\square \bigcirc \square = \square$$

 women were watching the concert.

- (b) How many men and women were watching the concert?

$$\square \bigcirc \square = \square$$

 men and women were watching the concert.

I have: ☐ checked through my work carefully at least 2 times after I completed it.
[Independent Learner, Cautiousness, Responsibility]

Primary Two Mathematics 2017
Review Assessment 3 - 1
Length and Mass

Name: _____ () Pr 2()

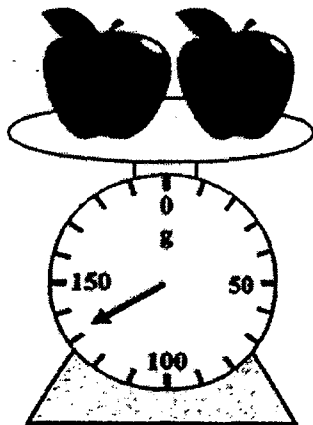
Date: _____

Your score out of 15 marks	
Parent's Signature	

Section A: (2 x 1 mark)

Choose the correct answer and write its number in the brackets provided.

1. The mass of the apples is about _____ g.



(1) 103

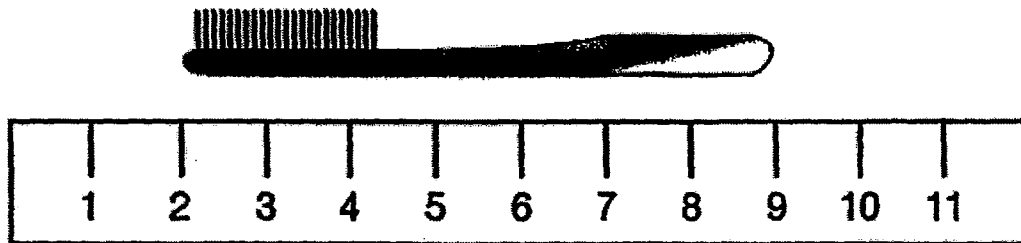
(3) 140

(2) 130

(4) 160

()

2. The length of the toothbrush is about _____ cm long.



(1) 7

(3) 8

(2) 2

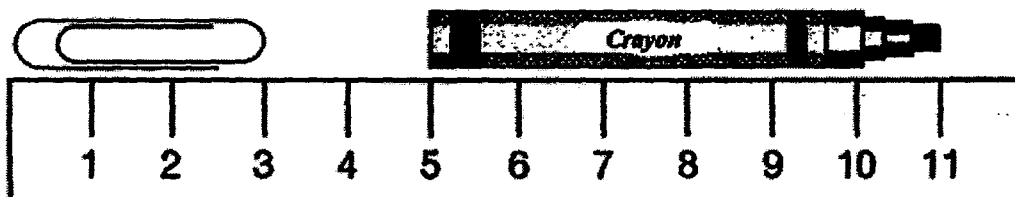
(4) 9

()

Section B: (4 X 2 marks)

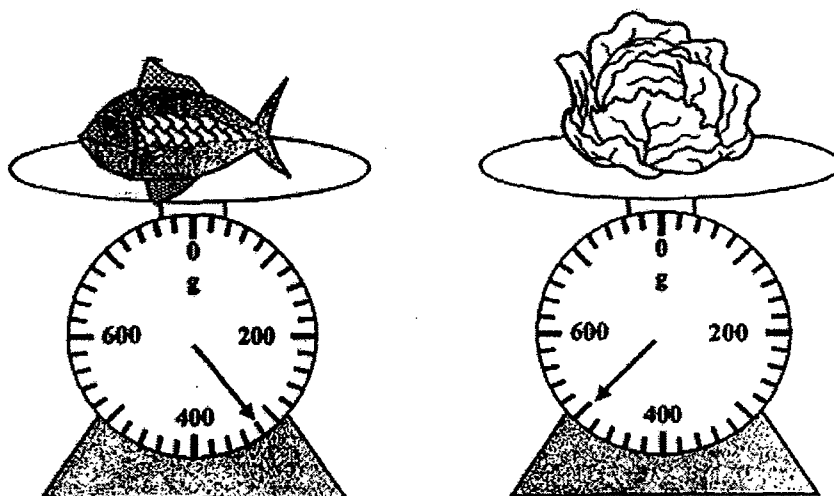
Work out these questions carefully and write the answers in the blanks provided.

3. Look at the pictures below.



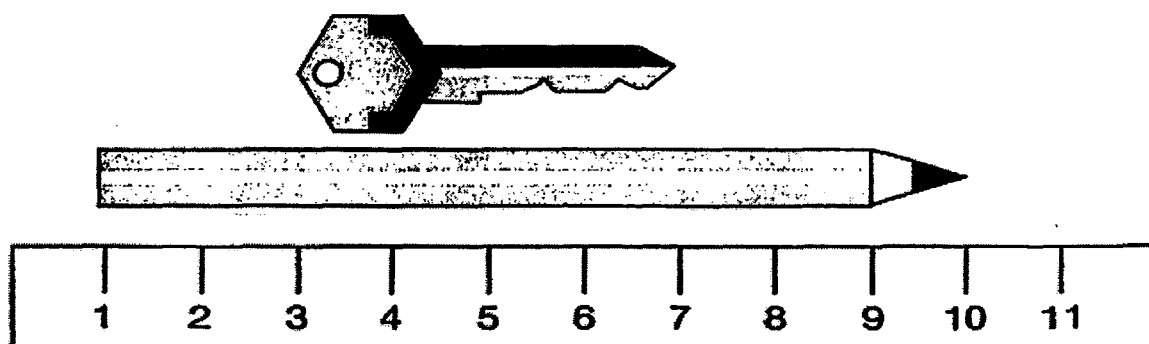
The total length of the paper clip and the crayon is about _____ cm.

4. Study the pictures below carefully.




The total mass of the fish and the cabbage is _____ g.

5. Look at the pictures below carefully.



The key is _____ cm shorter than the pencil.

6. Look at the pictures below carefully.



Box _____ is the heaviest.

Section C: (5 marks)

Show all number sentences and working clearly in the spaces provided.

7. Ali ran 950m. He ran 228m further than Tim. How far did Tim run? (2 marks)

Tim ran _____ m.

8. The total mass of 3 paper clips is 27g. Each paper clip has the same mass.
What is the mass of 5 paper clips? (3 marks)

The mass of 5 paper clips is _____ g.

-----The End-----

EXAM PAPER 2017(P2)

SCHOOL : RAFFLES GIRLS'

SUBJECT : MATHEMATICS

Review Assessment 1 – 1

- 1)4 2)2 3)3 4)a)eight hundred and forty-nine b)384
5)a)greater than 6)a)600 7)681 / 409 8)635 / 675
b)smaller than b)7
9)405

Review 2 – 1

- 1)2 2)4 3) $2 + 2 + 2 + 2 = 8$ 4)636 stamps 5) $5 \times 3 = 15$
 $4 \times 2 = 8$
6)a)40 b)100 7)498
8)a) $300 + 150 = 450$
450 women were watching the concert.
b) $450 + 300 = 750$

750 men and women were watching the concert,

Review 3 – 1

1)2 2)1 3)9cm 4)820 g 5)5 6)C

7) $950 - 228 = 722$

Tim ran 722 m.

8) $27 \div 3 = 9$

$9 \times 5 = 45$

The mass of 5 paper clips is 45 g.