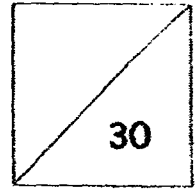


2017 PRIMARY 2
MATHEMATICS QUIZ 1
NUMBERS TO 1000
ADDITION AND SUBTRACTION



Name: _____ () Date: _____

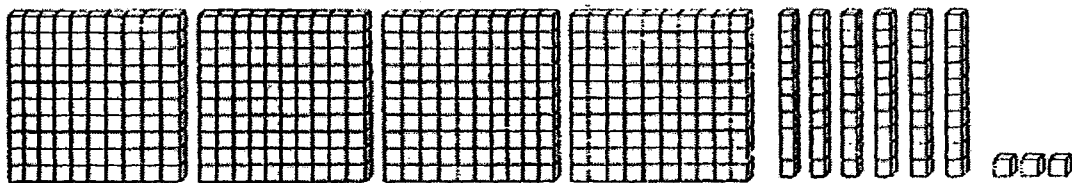
Class: Primary 2 _____ Parent's Signature: _____

Duration: 40 minutes

Section A: Multiple-choice Questions (4 x 1 mark)

Choose the correct answer and write its number (1, 2, 3 or 4) in the brackets provided.

1. What number does the picture show?



- (1) 364
- (2) 453
- (3) 463
- (4) 643

()

2. In 839, the digit '8' is in the _____ place.

(1) ones

(2) tens

(3) hundreds

(4) thousands

()

3. $697 + 214 =$ _____

(1) 801

(2) 811

(3) 901

(4) 911

()

4. $301 - 156 =$ _____

(1) 145

(2) 155

(3) 245

(4) 255

()

Section B: Open-ended Questions (14 marks)

Fill in the correct answers in the spaces provided.

Questions 5 to 8 carry 1 mark each and Questions 9 to 13 carry 2 marks each.

5. Write 193 in words.

6. _____ - 41 = 825

7. 220 + _____ = 780

8. Arrange all the numbers in order. Begin with the greatest.



Greatest

9. In 372,

a) the digit '3' stands for

b) the digit

is in the tens place.

10. Complete the number pattern. Write your answers in the boxes.

11. What is 10 tens less than 390?

12. Fill in the blanks with greater than or smaller than.

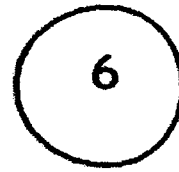



a) 413 is

418.

b) 390 is

309.

13. Use the following cards below and form the smallest 3-digit even number. Use each digit once only.



Section C: Problem Sums (3 x 4 marks)

Do these sums carefully. You may use models to help you. Show all your equations and workings clearly in the spaces provided.

14. Mrs Tan sold 105 apples on Saturday.
She sold 232 apples on Sunday.
How many apples did she sell on Saturday and Sunday altogether?

Working

She sold _____ apples altogether.

15. There are 537 children at the funfair.
359 of the children at the funfair are boys.
How many girls are there at the funfair?

Working

There are _____ girls.

16. Aini has 166 stamps.

Bala has 123 stamps.

a) How many more stamps does Aini have than Bala?

Working

Aini has _____ more stamps than Bala.

b) How many stamps do they have altogether?

Working

They have _____ stamps altogether.

- End of paper -

Setters: Mrs Png Lai Leng and Mr Siew Wai Kong

EXAM PAPER 2017(P2)

SCHOOL : HENRY PARK

SUBJECT : MATHEMATICS

TERM : CA1

Q1	Q2	Q3	Q4
3	3	4	1

5)one hundred and ninety-three

6)866

7)560

8)675 , 651 , 567 , 516

9)a)300

b)7

10)508 , 538

11)290

12)a)smaller than

b)greater than

13)126

14) $105 + 232 = 337$

She sold 337 apples altogether.

15) $537 - 359 = 178$

There are 178 girls.

16)a) $166 - 123 = 43$

Aini has 43 more stamps than Bala.

b) $166 + 123 = 289$

They have 289 stamps altogether.

