



Established since 1930

RULANG PRIMARY SCHOOL

Nurturing Competencies, Inspiring Excellence, Empowering Individuals
Scholars of Tomorrow

Name : _____ (.)

Level : Primary Two

Class : Primary 2 _____

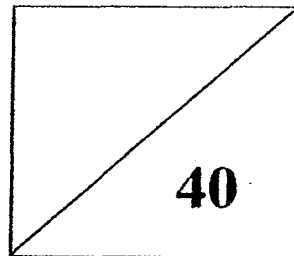
Date : 12 May 2015

Setter : Mr Surajkumar Natchinarkinian

MINI TEST (TERM 2)

2015

MATHEMATICS



TOTAL TIME: 50 minutes

16 questions

40 marks

- **DO NOT OPEN THIS BOOKLET UNTIL YOU ARE TOLD TO DO SO.**
- **READ ALL THE INSTRUCTIONS CAREFULLY.**
- **ANSWER ALL THE QUESTIONS.**

Questions 1 to 5 carry 2 marks each. For each question, four options are given. One of these is the correct answer. Choose the correct answer and write its number (1, 2, 3 or 4) in the bracket provided. **(10 marks)**

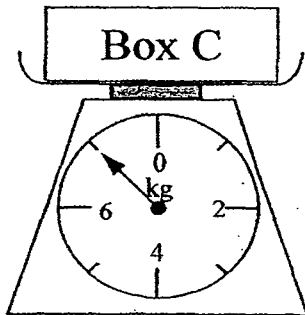
1. Which of the following numbers has the digit 5 in the tens and ones places?
(1) 557 (2) 575
(3) 577 (4) 755 ()

2. $816 + 12 = \boxed{\quad ? \quad}$
What is the missing number in the box above?
(1) 696 (2) 804
(3) 828 (4) 936 ()

3. David is trying to solve the equation shown below.
 $528 - 106 = \boxed{\quad ? \quad}$
Which of the following is what David has to do?
(1) Add 106 to 528 (2) Add 528 to 106
(3) Subtract 106 from 528 (4) Subtract 528 from 106 ()

4. Which of the following is most likely the height of a classroom door?
(1) 2 cm (2) 2 m
(3) 20 cm (4) 20 m ()

5. What is the mass of Box C shown below?



- (1) 7 kg (2) 2 kg
(3) 8 kg (4) 4 kg ()

Questions 6 to 10 carry 2 marks each. Show your working clearly in the space below each question and write your answers in the spaces provided. For questions which require units, give your answers in the units stated. **(10 marks)**

6. is 100 more than 560.
What is the missing number in the box above?

Ans:

7. $398 + 426 =$
What is the missing number in the box above?

Ans:

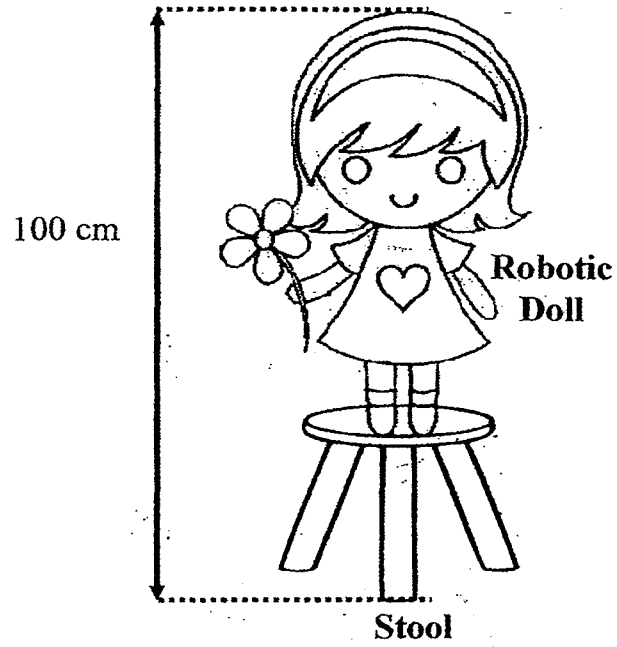
8. $900 - 235 =$
What is the missing number in the box above?

Ans:

9. $656 - 399 =$
What is the missing number in the box above?

Ans:

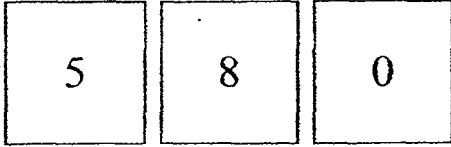
10. In the picture shown below, the stool has a height of 30 cm. Find the height of the robotic doll.



Ans: cm

Questions 11 to 14 carry 3 marks each. Questions 15 and 16 carry 4 marks each. Show your working clearly in the space provided for each question as marks will be awarded for relevant statements and correct answers. **(20 marks)**

11. Aini is given 3 numbered cards as shown below. She uses the 3 cards to form as many 3-digit numbers as possible.



a) What is the greatest number that she can form with the 3 cards?

The greatest number she can form is .

b) She is able to form two other numbers with values less than 800. What are the 2 numbers?

The 2 numbers are and .

12. Bala is 135 cm tall. David is 117 cm tall.

a) Who is shorter?

is shorter.

b) How much shorter is the shorter boy than the taller boy?

The shorter boy is cm shorter than the taller boy.

13. Parcel A has a mass of 450 g. It is 80 g lighter than Parcel B.

a) Which parcel is heavier? Parcel A or Parcel B?

Parcel is heavier.

b) What is the mass of Parcel B?

The mass of Parcel B is g.

14. John has 452 stamps. Alice has 179 stamps. Kelly has 103 stamps. How many stamps do the three children have altogether?

The three children have stamps altogether.

15. There are 381 pupils in a school hall. 193 of them are boys.
a) How many girls are there?


There are girls.

- b) Are there more girls or boys?

There are more

-
16. John's father bought him some stickers. He gave 25 stickers to his friend. He received 49 stickers from his uncle. He had a total of 170 stickers in the end. How many stickers did his father buy him?

His father bought him stickers.



EXAM PAPER 2015

LEVEL : PRIMARY 2

SCHOOL : RULANG PRIMARY SCHOOL

SUBJECT : MATHEMATICS

TERM : MINI TEST TERM 2

Q1	Q2	Q3	Q4	Q5
4	3	3	2	1

Q6. $660 \rightarrow 560+100=660$

Q7. $824 \rightarrow 398+426=824$

Q8. $665 \rightarrow 900-235=665$

Q9. $257 \rightarrow 656-399=257$

Q10. $70\text{cm} \rightarrow 100\text{cm}-30\text{cm}=70\text{cm}$

Q11. a) 850
b) 580 and 508

Q12. a) David
b) $18\text{cm} \rightarrow 135\text{cm}-117\text{cm}=18\text{cm}$

Q13. a) Parcel B is heavier.
b) The mass of Parcel B is 530g. $\rightarrow 450\text{g}+80\text{g}=530\text{g}$

Q14. $734 \rightarrow 452+179+103=734$

Q15. a) There are 188 girls. $\rightarrow 381-193=188$
b) There are more boys.

Q16. His father bought him 146 stickers. $\rightarrow 170-49=121, 121+25=146$

THE END

