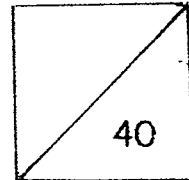




HENRY PARK PRIMARY SCHOOL
MATHEMATICS
2015 PRIMARY 2 (TERM 2)
TOPICAL QUIZ 2



Name: _____


Date: _____

Parent's Signature: _____

Section A : Multiple Choice Questions (6 x 1 mark = 6 marks)

Choose the correct answer and write its number in the brackets provided.

1. What is the length of the pencil shown below?



(1) 2 cm

(2) 9 cm

(3) 11 cm

(4) 13 cm

()

2. The height of the door in the classroom is about _____.

(1) 2 cm

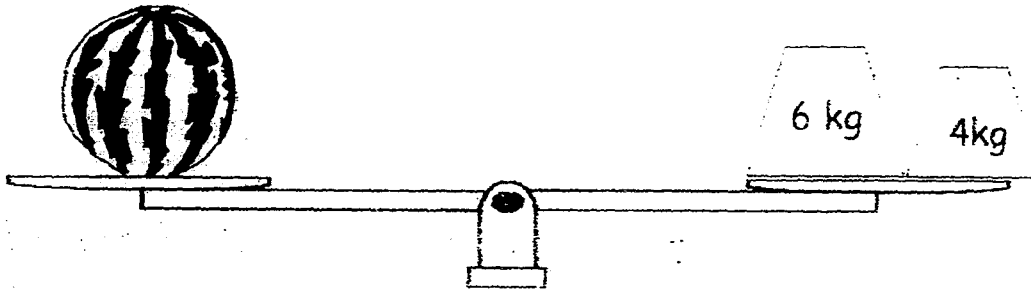
(2) 2 m

(3) 20 cm

(4) 20 m

()

3. What is the mass of 1 watermelon shown below?



(1) 10 kg

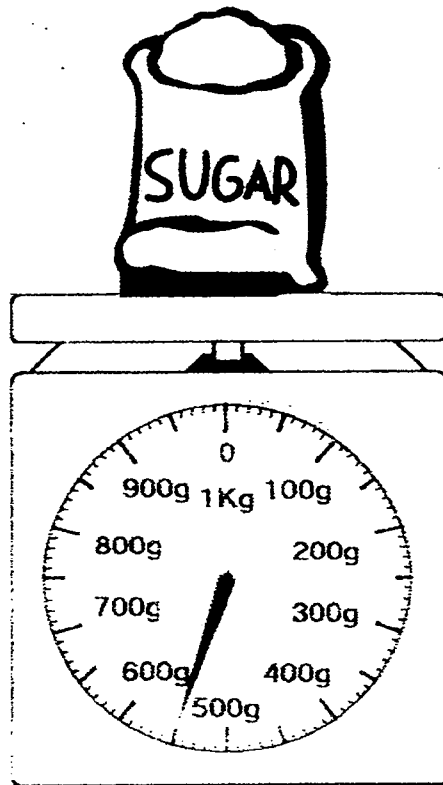
(2) 6 kg

(3) 5 kg

(4) 4 kg

()

4. Look at the picture below.




What is the mass of the bag of sugar in grams?

- (1) 500 g
- (2) 505 g
- (3) 550 g
- (4) 600 g

()

5. A bicycle has 2 wheels. How many wheels do 6 bicycles have altogether?



(1) 6

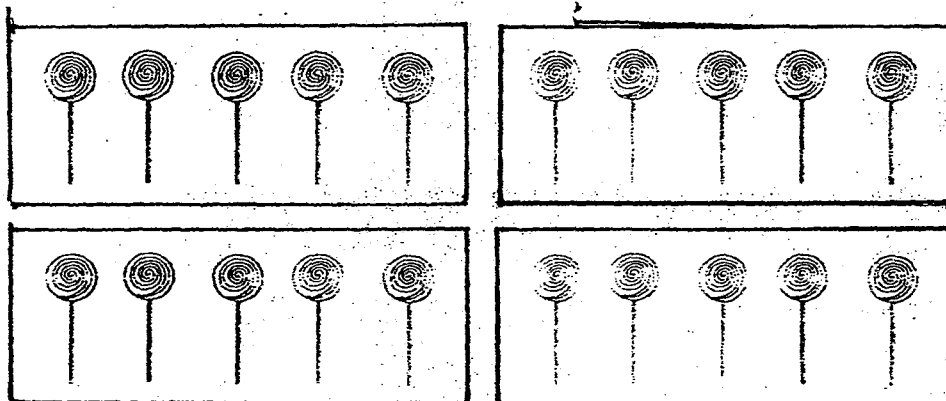
(2) 2

(3) 8

(4) 12

()

6. Look at the picture below. Which of the following equation shows that 20 lollipops are put equally into 4 boxes?



(1) $20 + 4$

(2) $20 - 4$

(3) 20×4

(4) $20 \div 4$

()

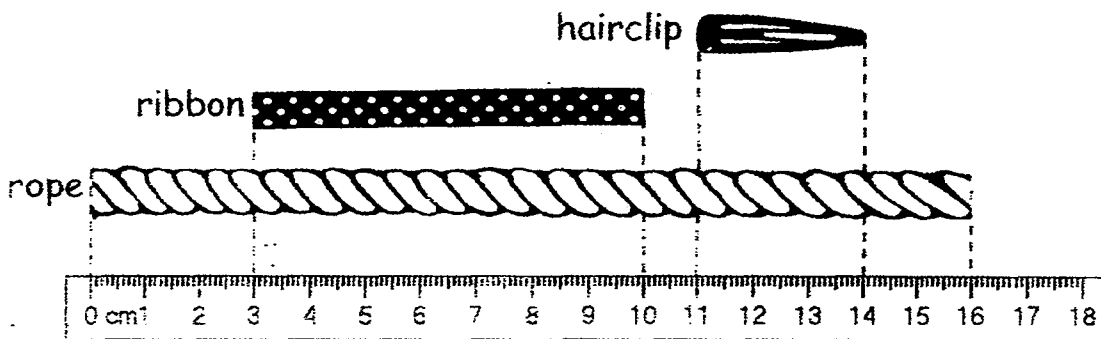
Section B : Open - Ended Questions

Questions 7 to 16 carry 1 mark each. (10 x 1 mark = 10 marks)

Questions 17 - 22 carry 2 marks each. (6 x 2 marks = 12 marks)

Fill in your answers in the boxes provided.

Look at the picture below and answer questions 7 and 8.




7. What is the length of the rope?

 cm

8. What is the total length of the ribbon and hairclip?

 cm


9. Look at the picture below.



What is the height of Doll A?


cm

10. Look at the picture below. Fill in your answer in the box provided.



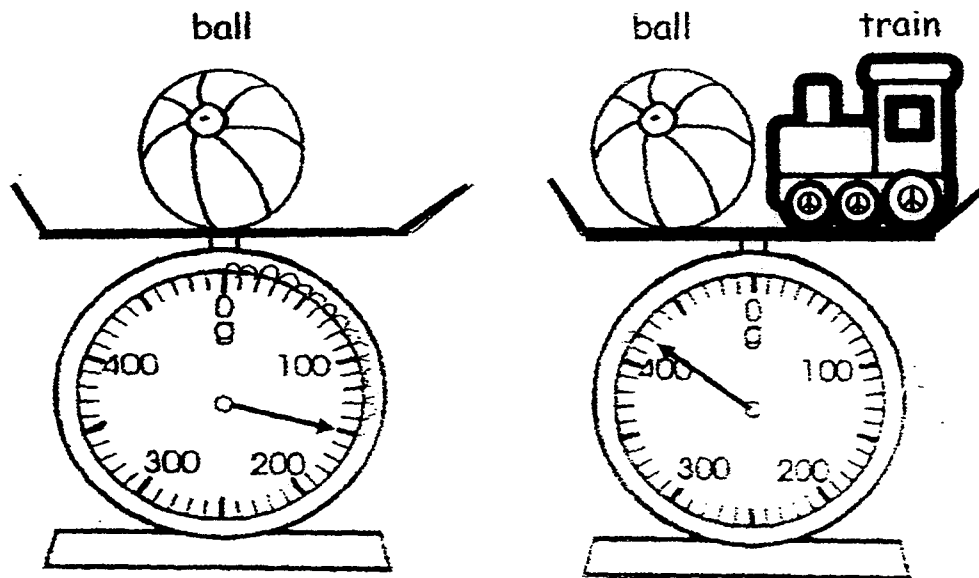
The above picture shows _____ ~~nines.~~ **Sevens.**

11. Look at the picture below. Complete the following equation.



$$7 \times \boxed{} = \boxed{}$$

Study the picture below and answer questions 12, 13 and 14.



12. The mass of the ball is

 g

13. The total mass of the ball and toy train is





 g

14. The mass of the toy train is

 g

15. Arrange the children in the boxes shown below according to their mass. Write their names in the boxes provided.

Begin with the lightest child.



lightest

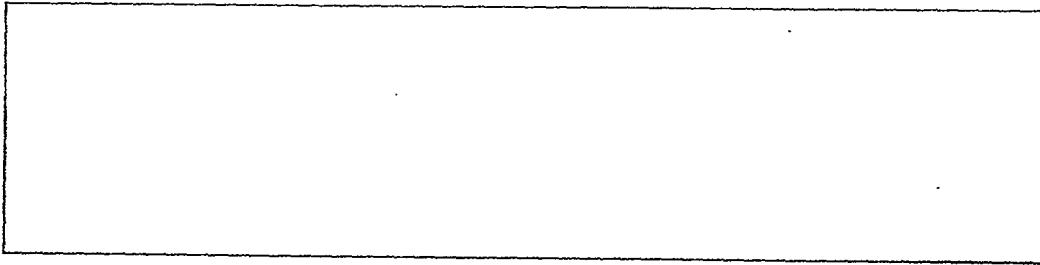
16. 3 children share 18 cupcakes equally.

How many cupcakes does each child get?

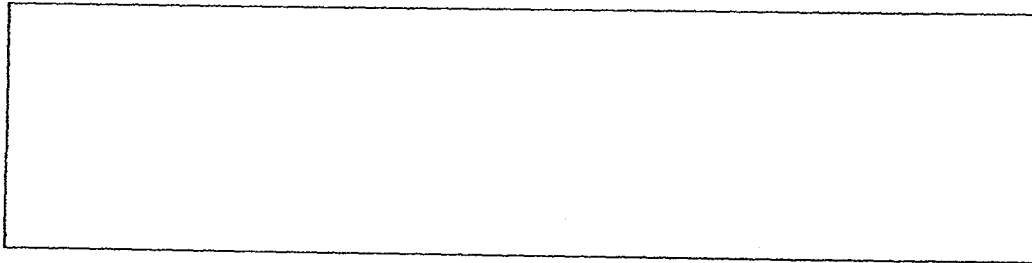
Circle to show your answer.



17. (a) Draw a straight line 9 cm long in the space provided.



- (b) Draw a straight line 3 cm shorter than 9 cm in the space provided.

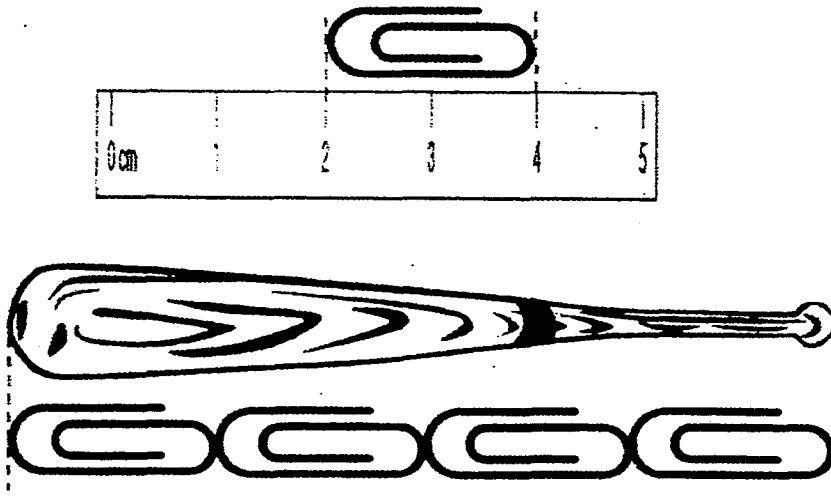


18. Fill in the boxes with 'g' or 'kg'.

(a) The mass of an adult zebra is about 380

(b) The mass of a lobster is about 450

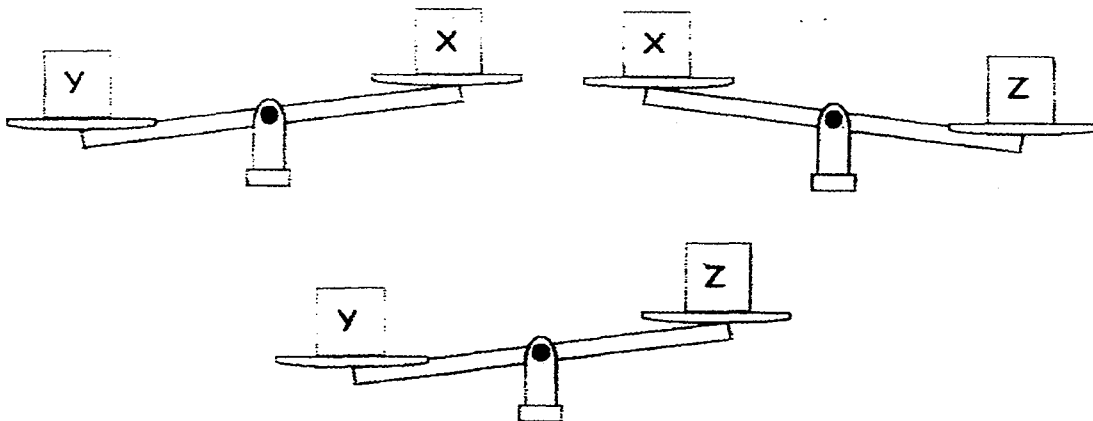
19. Study the pictures below:



What is the length of the toy bat?

cm


20. Study the pictures below.



(a) Box is the heaviest.

(b) Box is the lightest.

21. Study the picture below.




Write one multiplication and one division equation for the picture.

$$\square \times \square = \square$$

$$\square \div \square = \square$$

22. Mrs Tan needs a total of 52 m of cloth to make some curtains.


Tick (✓) the 2 pieces of cloth that she needs.



Cloth A is 29 m.



Cloth B is 38 m.



Cloth C is 23 m.

Section C: Word Problems (4 x 3 marks = 12 marks)

Questions 23 to 26 carry 3 mark each. Read each question carefully.

Show all your equations and word statements clearly in the spaces provided.

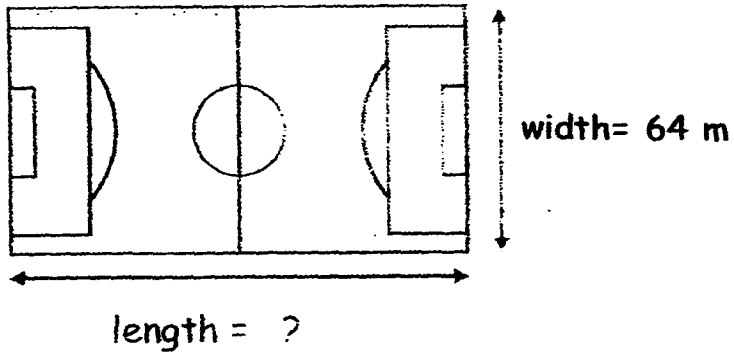
23. String A is 418 cm long.

Working

String B is 129 cm shorter than String A.



What is the length of String B?

24. The width of a soccer field is 64 m.
Its length is 38 m longer than its width.
What is the length of the field?



Working


25. The mass of a pineapple is 875 g.
The mass of a coconut is 680 g.
How much heavier is the pineapple?



Working

26. There are 8 stacks of books. There are 5 books in each stack.
How many books are there altogether?

Working



-END OF PAPER-

EXAM PAPER 2015

LEVEL : PRIMARY 2

SCHOOL : HENRY PARK PRIMARY SCHOOL

SUBJECT : MATHEMATICS

TERM : QUIZ 2

Q1	Q2	Q3	Q4	Q5	Q6
2	2	1	3	4	4

Q7. 7cm Q8. 10cm Q9. 33cm Q10. 3 Q11. $7 \times 4 = 28$

Q12. 150g Q13. 430g Q14. 380g

Q15. Ahmad (lightest), Devi, Benny

Q16. $18 \div 3 = 6$

Q17a. 9cm

Q17b. 6cm

Q18a. kg Q18b. gram

Q19. 8cm Q20a. Box Y is the heaviest. Q20b. Box X is the lightest.

Q21. $6 \times 5 = 30$, $30 \div 6 = 5$

Q22. Tick on cloth 29m and 23m

Q23. 289cm $418 - 129 = 289$

Q24. 102cm $64 + 38 = 102$

Q25. $875 - 680 = 195$ g

Q26. ~~40~~ $8 \times 5 = 40$

THE END

