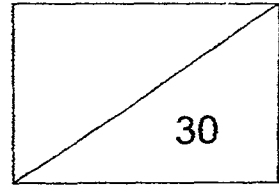


**Ai Tong School
Primary 2 Mathematics
Summative Assessment 2015
Term 2 Mini Test 2**




Name: _____

Date: _____


Class: _____

1. Write the repeated equation and the multiplication equation for the diagram below. (3 marks)




$$\begin{aligned} & \underline{\hspace{2cm}} + \underline{\hspace{2cm}} + \underline{\hspace{2cm}} + \underline{\hspace{2cm}} \\ & = \underline{\hspace{2cm}} \times \underline{\hspace{2cm}} \\ & = \underline{\hspace{2cm}} \end{aligned}$$

2. Divide 20 strawberries equally into groups of 5. (2 marks)








$$\underline{\hspace{2cm}} \div \underline{\hspace{2cm}} = \underline{\hspace{2cm}}$$

3. Divide 18 fish into 3 groups.
Circle the fish to show how you group them. (2 marks)



There are _____ fish in each group.

4. Solve these and write the answers in the blanks provided. (1 mark each)

(a)	$2 \times 9 =$ _____
(b)	5 threes = _____
(c)	$6 \times 4 =$ _____
(d)	 \times  = 25 What does  stand for? _____
(e)	 $\times 10 = 20$ What does  stand for? _____

5. Complete the multiplication equation and the related division equation.
(5 × 2 marks each)

(a)	$2 \times \underline{\hspace{2cm}} = 6$ $6 \div 2 = \underline{\hspace{2cm}}$
(b)	$3 \times 7 = \underline{\hspace{2cm}}$ $\underline{\hspace{2cm}} \div 3 = 7$
(c)	$4 \times \underline{\hspace{2cm}} = 16$ $16 \div 4 = \underline{\hspace{2cm}}$
(d)	$5 \times 8 = \underline{\hspace{2cm}}$ $\underline{\hspace{2cm}} \div 8 = 5$
(e)	$10 \times \underline{\hspace{2cm}} = 70$ $70 \div 10 = \underline{\hspace{2cm}}$

Read the word problems carefully.

Write your equations and answers in the space provided.

(2 marks each)

6. There are 4 groups of children.
If there are 2 children in each group, how many children are there altogether?

There are _____ children altogether.

7. Larry has 45 toy cars.
If he puts them equally in 5 boxes, how many toy cars are there in each box?

There are _____ toy cars in each box.


8. Jack bought 3 packets of cards.
There are 10 cards in each packet.
How many cards did he buy altogether?

He bought _____ cards altogether.

9. Sumei sews 36 buttons on some dolls.
If each doll has 4 buttons, how many dolls are there?

There are _____ dolls.

END OF PAPER



EXAM PAPER 2015

LEVEL : PRIMARY 2

SCHOOL : AI TONG SCHOOL

SUBJECT : MATHEMATICS

TERM : TERM 2 MINI TEST 2

Q1. $3+3+3+3=4 \times 3=12$

Q2. $20 \div 5=4$

Q3. There are 6 fish in each group.

Q4. a) 18 b) 15 c) 24 d) 5 e) 2

Q5. a) 3, 3 b) 21, 21 c) 4, 4 d) 40, 40 e) 7, 7

Q6. There are 8 children together. $\rightarrow 4 \times 2=8$

Q7. There are 9 toy cars in each box. $\rightarrow 45 \div 5=9$

Q8. He bought 30 cards altogether. $\rightarrow 3 \times 10=30$

Q9. There are 9 dolls. $\rightarrow 36 \div 4=9$

THE END

