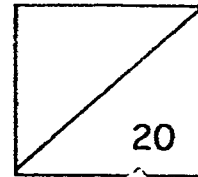


PAYA LEBAR METHODIST GIRLS' SCHOOL (PRIMARY)

Name : _____ ()

Class : Primary 2 _____

Date : 2 March 2015



Section A: (6 x 1 mark = 6 marks)

Read the questions carefully. Write your answer in the boxes provided.

1. Write 912 in words.

2. $600 + \boxed{} + 3 = 683$

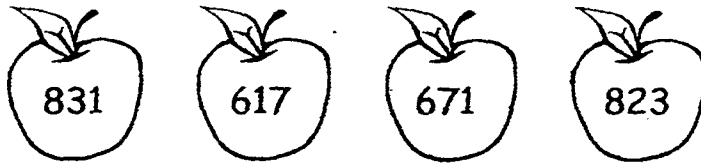
3.

	4	3	6
+	2	9	8

4.

	5	0	0
-	1	4	2

5. Arrange these numbers in order.
Begin with the smallest.



--	--	--	--

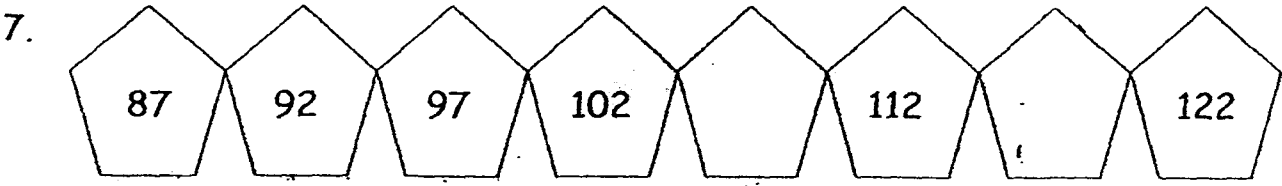
smallest

6.

$$\begin{array}{r} 809 \\ - \square 52 \\ \hline 45\square \end{array}$$

Section B: (4 x 2 marks = 8 marks)

Read the questions carefully. Write your answer in the boxes provided.
Show all your working clearly as marks will be awarded for your working.



8. 100 more than 387 is

Use these three cards to answer questions 9a and 9b.

9. a) Arrange all the cards to form a 3-digit odd number.

is a 3-digit odd number.

b) Arrange all the cards to form the greatest 3-digit even number.

is the greatest 3-digit even number.

10. The difference between the second and fourth numbers

below is

419

73

126

529

132

5th

Section C: (2 x 3 marks = 6 marks)

Read each question carefully and show your working clearly. Marks will only be awarded for correct equations, algorithms and answers in the word statements.

11. There are 568 people in the cinema.

391 of them are men.

a) How many women are there?

There are women.

b) How many more men than women are there in the cinema?

There are more men than women in the cinema.

12. Miss Goh sold 351 cupcakes on Monday.
She sold 56 more cupcakes on Monday than on Friday.
- a) How many cupcakes did Miss Goh sell on Friday?

Miss Goh sold cupcakes on Friday.

- b) How many cupcakes did Miss Goh sell on both days?

Miss Goh sold cupcakes on both days.

End of Paper



Have you
checked
your work?



EXAM PAPER 2015

LEVEL : PRIMARY 2

SCHOOL : PAYA LEBAR METHODIST GIRLS (Primary)

SUBJECT : MATH

TERM : TOPICAL TEST ON 2nd march 2015

Q1. nine hundred and twelve

Q2. $600 + \boxed{80} + 3 = 683$

Q3. 734

Q4. 358

Q5. smallest \rightarrow 617, 671, 831, 823

Q6. 457

Q7. all plus 5 \rightarrow 107, 117

Q8. 487

Q9a. 207, is a 3 digit odd number

Q9b. 720, is the greatest 3 - digit odd number

Q10. $456 \rightarrow 529 - 73 = 456$

Q11a. 177 women $\rightarrow 568 - 391 = 177$

Q11b. $214 \rightarrow 591 - 177 = 214$

Q12a. $295 \rightarrow 351 - 56 = 295$

Q12b. $646 \rightarrow 351 + 295 = 646$

THE END

